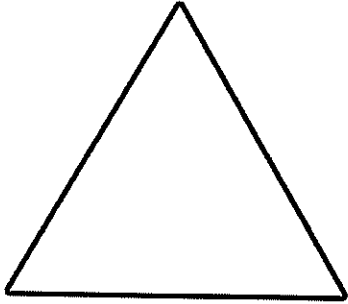


Properties of 2D Shapes

Write down the properties of the shapes.




A triangle has ____ sides.

A triangle has ____ corners.




A rectangle has ____ sides.

A rectangle has ____ corners.



A square has ____ sides.

A square has ____ corners.



A quadrilateral has ____ sides.

A quadrilateral has ____ corners.