

Name

Date



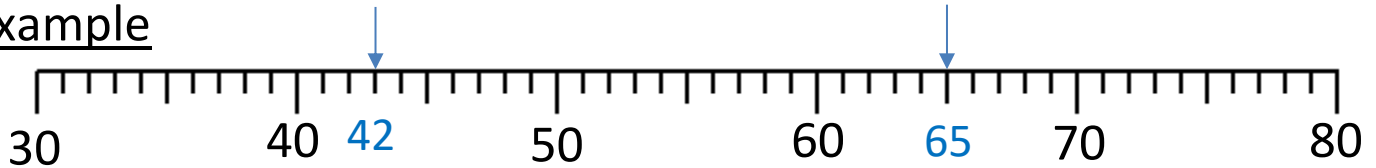
## ROUNDING TO THE NEAREST 10 SHEET 2

Write down the value of each number marked by an arrow.

Round the number to the nearest 10.

Remember: if the number is exactly half-way, it will round up to the next ten.


### Example



42 to the nearest 10 is 40


65 to the nearest 10 is 70

1)



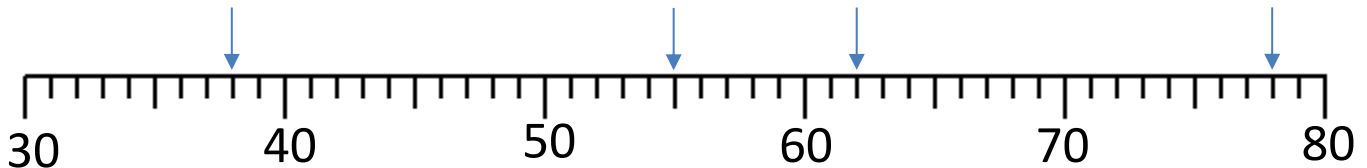
36 to the nearest 10 is \_\_\_\_\_ to the nearest 10 is \_\_\_\_\_

2)



\_\_\_\_\_ to the nearest 10 is \_\_\_\_\_ to the nearest 10 is \_\_\_\_\_

3)



\_\_\_\_\_ to the nearest 10 is \_\_\_\_\_ to the nearest 10 is \_\_\_\_\_

\_\_\_\_\_ to the nearest 10 is \_\_\_\_\_ to the nearest 10 is \_\_\_\_\_

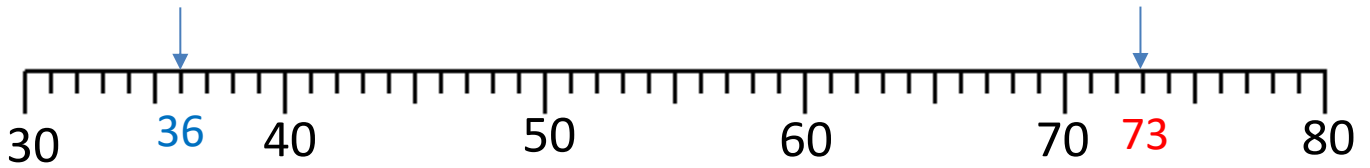
Name

Date



## ROUNDING TO THE NEAREST 10 SHEET 2 ANSWERS


1)



36 to the nearest 10 is 40

73 to the nearest 10 is 70

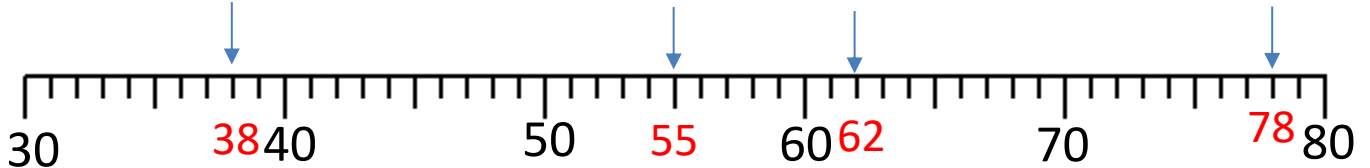
2)



45 to the nearest 10 is 50

64 to the nearest 10 is 60

3)



38 to the nearest 10 is 40

55 to the nearest 10 is 60

62 to the nearest 10 is 60

78 to the nearest 10 is 80