










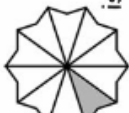









<p>1 In the number 987 654 what does the 5 stand for?</p>					<p>2 Calculate $70 \div 10$</p>
<p>7 What is the name of this 2D shape?</p> 	<p>6 If today is Wednesday, what day will it be in ten days time?</p> 	<p>5 Write the following in 24 hour time...</p> 	<p>4 How many lines of symmetry does this Easter egg have?</p> 	<p>3 $78 + 54$ _____</p>	<p>8 Write the 8th of April 2011 as numbers only.</p> 
<p>13 D₂ Today is National Scrabble Day.</p> <p>Y₄ How many points is the word scrabble worth?</p>	<p>12 $857 - 489$ _____</p>	<p>11 How many 5p's are there in £3?</p> 	<p>10 Write the next two numbers in this sequence. 9, 18, 27, 36, ...</p>	<p>9 Is this statement true or false? $6 < 7$</p>	<p>14 How many days are there in December?</p> 
<p>19 Calculate 2×12</p>	<p>18 Round 2.7 metres to the nearest metre.</p> 	<p>17 Write the number 17 107 in words</p> 	<p>16 Write these numbers in order from the smallest to the biggest: 189, 103, 125, 156</p>	<p>15 23×7 _____</p>	<p>20 On this map, what direction should the explorer travel in to get the crystal?</p> 
<p>25 Which is bigger? 8×8 or 7×9 Give a reason for your answer!</p>	<p>24 $5 \overline{) 90}$</p>	<p>23 Today is World Book Day. It is recommended that a beginner should read for 20 minutes a day in addition to the reading they do at school. How many minutes is this per week?</p> 	<p>22 What fraction of this shape is shaded?</p> 	<p>21 What is the value of the missing number represented by the shape below? $\bigcirc + 6 = 10$</p> 	<p>26 What is the name of this 3D object?</p> 
<p>30 In a supermarket a sandwich costs £1.59, a bottle of juice costs £1.20 and a bag of crisps cost 89p. As a special offer, these three items can be bought in a £3 "meal deal". How much would a customer save by buying the £3 meal deal?</p> 	<p>29 Write the time shown here in words</p> 	<p>28 Today is National Superhero Day. How many letters are in this superhero's name?</p> 	<p>27 What number is 40 less than 2830?</p>		