

# My Eight Times Table Activity Booklet

Name: \_\_\_\_\_



I can count in 8s. Fill in the blanks.

0

8

---

---

---

40

---

---


64

---

---



88

---





I can evaluate my learning.

I think this work was...



My teacher thinks...



My next steps are:

---

---

---

---

I can complete missing number calculations.

$8 \times \underline{\quad} = 16$

$8 \times \underline{\quad} = 48$

$8 \times \underline{\quad} = 32$

$8 \times \underline{\quad} = 40$

$8 \times \underline{\quad} = 56$

$8 \times \underline{\quad} = 48$

$8 \times \underline{\quad} = 80$

$8 \times \underline{\quad} = 32$

$8 \times \underline{\quad} = 8$

$8 \times \underline{\quad} = 0$

$8 \times \underline{\quad} = 40$

$8 \times \underline{\quad} = 72$

$8 \times \underline{\quad} = 88$

$8 \times \underline{\quad} = 96$

$8 \times \underline{\quad} = 88$

$8 \times \underline{\quad} = 8$

$8 \times \underline{\quad} = 16$

$8 \times \underline{\quad} = 64$

$8 \times \underline{\quad} = 32$

$8 \times \underline{\quad} = 72$

$8 \times \underline{\quad} = 40$

$8 \times \underline{\quad} = 64$

$8 \times \underline{\quad} = 0$

$8 \times \underline{\quad} = 16$

$8 \times \underline{\quad} = 72$

$8 \times \underline{\quad} = 64$

$8 \times \underline{\quad} = 24$

$8 \times \underline{\quad} = 24$

$8 \times \underline{\quad} = 88$

$8 \times \underline{\quad} = 80$

$8 \times \underline{\quad} = 48$

$8 \times \underline{\quad} = 24$

$8 \times \underline{\quad} = 0$

$8 \times \underline{\quad} = 96$

$8 \times \underline{\quad} = 8$

$8 \times \underline{\quad} = 56$

I can complete 8 times table calculations.

$0 \times 8 = \underline{\hspace{2cm}}$

$1 \times 8 = \underline{\hspace{2cm}}$

$2 \times 8 = \underline{\hspace{2cm}}$

$3 \times 8 = \underline{\hspace{2cm}}$

$4 \times 8 = \underline{\hspace{2cm}}$

$5 \times 8 = \underline{\hspace{2cm}}$

$6 \times 8 = \underline{\hspace{2cm}}$

$7 \times 8 = \underline{\hspace{2cm}}$


$8 \times 8 = \underline{\hspace{2cm}}$

$9 \times 8 = \underline{\hspace{2cm}}$

$10 \times 8 = \underline{\hspace{2cm}}$

$11 \times 8 = \underline{\hspace{2cm}}$

$12 \times 8 = \underline{\hspace{2cm}}$



I can complete 8 times table calculations.

$0 \times 8 = \underline{\hspace{2cm}}$       $10 \times 8 = \underline{\hspace{2cm}}$

$1 \times 8 = \underline{\hspace{2cm}}$       $11 \times 8 = \underline{\hspace{2cm}}$

$2 \times 8 = \underline{\hspace{2cm}}$       $12 \times 8 = \underline{\hspace{2cm}}$

$3 \times 8 = \underline{\hspace{2cm}}$

$4 \times 8 = \underline{\hspace{2cm}}$

$5 \times 8 = \underline{\hspace{2cm}}$

$6 \times 8 = \underline{\hspace{2cm}}$

$7 \times 8 = \underline{\hspace{2cm}}$

$8 \times 8 = \underline{\hspace{2cm}}$

$9 \times 8 = \underline{\hspace{2cm}}$



I can complete missing number calculations.

$8 \times \square = 0$

$8 \times \square = 8$

$8 \times \square = 16$

$8 \times \square = 24$

$8 \times \square = 32$

$8 \times \square = 40$

$8 \times \square = 48$

$8 \times \square = 56$

$8 \times \square = 64$

$8 \times \square = 72$

$8 \times \square = 80$

$8 \times \square = 88$

$8 \times \square = 96$

I can complete calculations.

$5 \times 8 = \underline{\quad\quad}$   $8 \times 11 = \underline{\quad\quad}$   $8 \times 12 = \underline{\quad\quad}$

$7 \times 8 = \underline{\quad\quad}$   $8 \times 6 = \underline{\quad\quad}$   $5 \times 8 = \underline{\quad\quad}$

$10 \times 8 = \underline{\quad\quad}$   $8 \times 2 = \underline{\quad\quad}$   $0 \times 8 = \underline{\quad\quad}$

$6 \times 8 = \underline{\quad\quad}$   $8 \times 0 = \underline{\quad\quad}$   $8 \times 3 = \underline{\quad\quad}$

$9 \times 8 = \underline{\quad\quad}$   $8 \times 1 = \underline{\quad\quad}$   $8 \times 9 = \underline{\quad\quad}$

$0 \times 8 = \underline{\quad\quad}$   $8 \times 7 = \underline{\quad\quad}$   $7 \times 8 = \underline{\quad\quad}$

$11 \times 8 = \underline{\quad\quad}$   $8 \times 10 = \underline{\quad\quad}$   $6 \times 8 = \underline{\quad\quad}$

$1 \times 8 = \underline{\quad\quad}$   $8 \times 5 = \underline{\quad\quad}$   $8 \times 4 = \underline{\quad\quad}$

$8 \times 8 = \underline{\quad\quad}$   $8 \times 12 = \underline{\quad\quad}$   $8 \times 8 = \underline{\quad\quad}$

$2 \times 8 = \underline{\quad\quad}$   $8 \times 3 = \underline{\quad\quad}$   $8 \times 1 = \underline{\quad\quad}$

$12 \times 8 = \underline{\quad\quad}$   $8 \times 8 = \underline{\quad\quad}$   $2 \times 8 = \underline{\quad\quad}$

$3 \times 8 = \underline{\quad\quad}$   $8 \times 9 = \underline{\quad\quad}$   $11 \times 8 = \underline{\quad\quad}$

I can find the products of the 8 times table.

Circle the products.

8 40 72  
7 18  
54 16  
88 4  
24 42  
0 80  
64 63  
56 48  
13 17 32  
96

I can count forward in 8s starting at any point.

8, 16, \_\_\_\_\_, 32, \_\_\_\_\_

24, \_\_\_\_\_, 40, \_\_\_\_\_, 56

\_\_\_\_\_, 48, \_\_\_\_\_, 64, 72

56, \_\_\_\_\_, \_\_\_\_\_, 80, 88

\_\_\_\_\_, \_\_\_\_\_, 32, \_\_\_\_\_, 48

I can count backwards in 8s starting at any point.

80, 72, \_\_\_\_\_, 56, \_\_\_\_\_

32, \_\_\_\_\_, 16, \_\_\_\_\_, 0

\_\_\_\_\_, 40, \_\_\_\_\_, 24, 16

64, 56, \_\_\_\_\_, \_\_\_\_\_, 32

\_\_\_\_\_, \_\_\_\_\_, 64, \_\_\_\_\_, \_\_\_\_\_