

Name

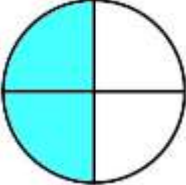


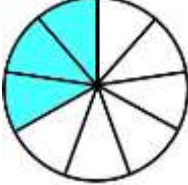
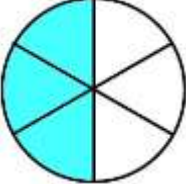
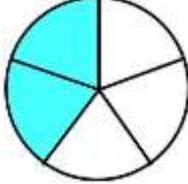
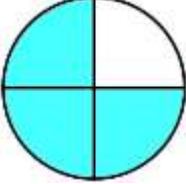
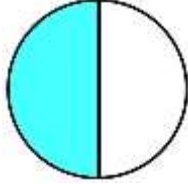
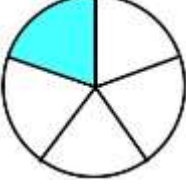
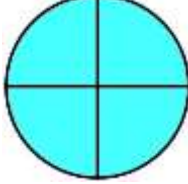
Date



# EQUIVALENT FRACTIONS WITH CIRCLES SHEET 3

Shade in the correct fraction of the circle and complete the equivalent fractions.

The first one is done for you.

1)  $\frac{2}{4} = \frac{4}{8}$	6)  _____ = _____
2)  _____ = _____	7)  _____ = _____
3)  _____ = _____	8)  _____ = _____
4)  _____ = _____	9)  _____ = _____
5)  _____ = _____	10)  _____ = _____



Name

Date



# EQUIVALENT FRACTIONS WITH CIRCLES SHEET 3 ANSWERS

1)		=		6)		=	
	$\frac{2}{4}$		$\frac{4}{8}$		$\frac{2}{3}$		$\frac{6}{9}$
2)		=		7)		=	
	$\frac{2}{3}$		$\frac{4}{6}$		$\frac{3}{9}$		$\frac{2}{6}$
3)		=		8)		=	
	$\frac{3}{6}$		$\frac{2}{4}$		$\frac{2}{5}$		$\frac{4}{10}$
4)		=		9)		=	
	$\frac{3}{4}$		$\frac{6}{8}$		$\frac{1}{2}$		$\frac{5}{10}$
5)		=		10)		=	
	$\frac{1}{5}$		$\frac{2}{10}$		$\frac{4}{4}$		$\frac{5}{5}$

