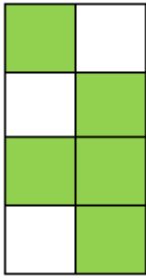


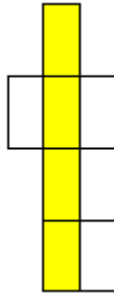
Student Name: _____

Score: _____


What Fraction of Boxes Filled with Colors?



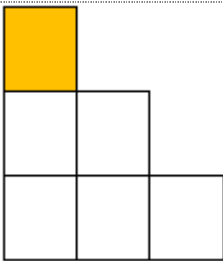
Fraction: _____



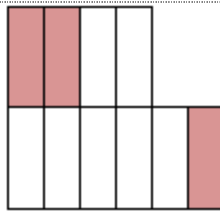
Fraction: _____




Fraction: _____



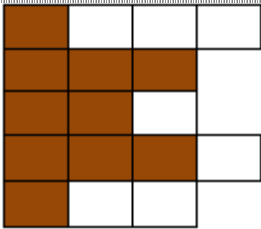
Fraction: _____




Fraction: _____




Fraction: _____



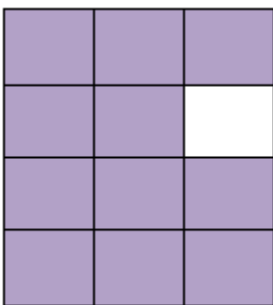
Fraction: _____



Fraction: _____




Fraction: _____



Fraction: _____



Fraction: _____



Fraction: _____

Student Name: _____

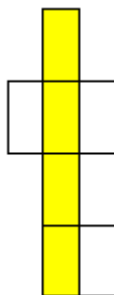
Score: _____

Answer key


What Fraction of Boxes Filled with Colors?



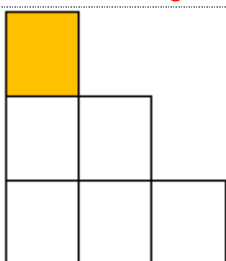
Fraction: $\frac{5}{8}$



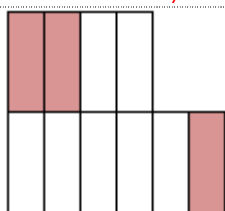
Fraction: $\frac{4}{7}$




Fraction: $\frac{5}{7}$




Fraction: $\frac{1}{6}$




Fraction: $\frac{3}{10}$




Fraction: $\frac{4}{7}$



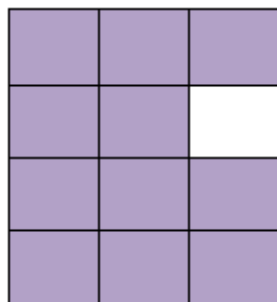
Fraction: $\frac{10}{17}$



Fraction: $\frac{6}{7}$




Fraction: $\frac{3}{8}$



Fraction: $\frac{11}{12}$



Fraction: $\frac{5}{9}$



Fraction: $\frac{5}{12}$