



1 In the ? number 987 654 what does the 5 stand for?


2 Calculate
 $70 \div 10$


3
$$\begin{array}{r} 78 \\ + 54 \\ \hline \end{array}$$

4 How many lines of symmetry does this Easter egg have?


5 Write the following in 24 hour time...



6 If today is Wednesday, what day will it be in ten days ?

7 What is the name of this 2D shape?


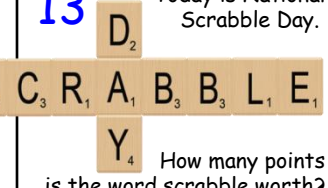
8 Write the 8th of April 2011 as numbers only.


9 Is this statement true or false?
 $6 < 7$

10 Write the next two numbers in this sequence.
9, 18, 27, 36, ...

11 How many 5p's are there in £3?



12
$$\begin{array}{r} 857 \\ - 489 \\ \hline \end{array}$$


13 Today is National Scrabble Day.

How many points is the word scrabble worth?

14 How many days are there in December?



15
$$\begin{array}{r} 23 \\ \times 7 \\ \hline \end{array}$$


16 Write these numbers in order from the smallest to the biggest:
189, 103, 125, 156

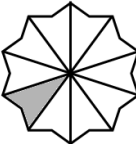
17 Write the number 17 107 in words



18 Round 2.7 metres to the nearest metre.


19 Calculate
 2×12

20 On this map, what direction should the explorer travel in to get the crystal?



21 What is the value of the missing number represented by the shape below?
 + 6 = 10

22 What fraction of this shape is shaded?



23 Today is World Book Day. It is recommended that a beginner should read for 20 minutes a day in addition to the reading they do at school. How many minutes is this per week?



24
$$\begin{array}{r} \\ 5 \overline{) 90} \\ \hline \end{array}$$

25 ? Which is bigger?
 8×8 or 7×9
Give a reason for your answer!

26 What is the name of this 3D object?


27 What number is 40 less than 2830? ?

28 Today is National Superhero Day. How many letters are in this superhero's name?


29 Write the time shown here in words


30 In a supermarket a sandwich costs £1.59, a bottle of juice costs £1.20 and a bag of crisps cost 89p. As a special offer, these three items can be bought in a £3 "meal deal". How much would a customer save by buying the £3 meal deal?
