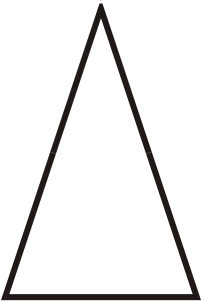


Classifying triangles (equilateral / isosceles / scalene / right)

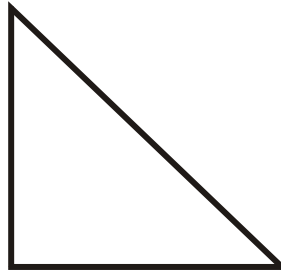
Grade 5 Geometry Worksheet

Classify the triangles.

1.



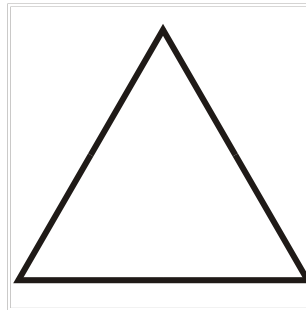
2.



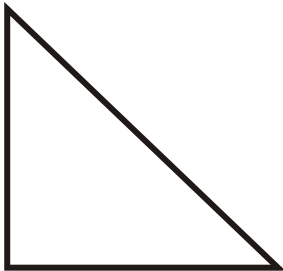
3.



4.



5.



6.

