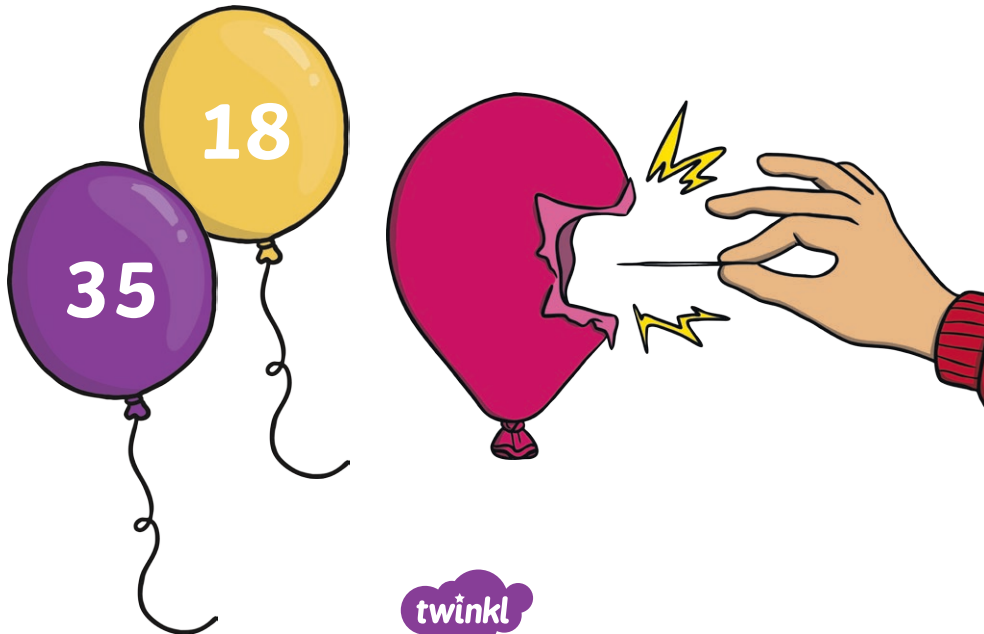




# Maths Word Problems and Popping Answers Balloon Question Cards




Maths Word Problems and Popping Answers Balloon Questions

If you have 100 flowers and give 34 of them away, how many would you have left?



If you count 85 ladybirds in your garden and 21 fly away, how many ladybirds would be left?




If you count 70 leaves on a path and another 24 leaves fall to the ground, how many leaves would there be?



Emil has 38 sweets and buys 19 more. How many sweets does he have now?




While playing a dice game, Karin managed to throw 9 5s in a row. What is her total score?



12 people came to the show and they paid £2 each. How much money was raised by the ticket sales altogether?




Alun has 16 stickers. He gives his brother 7 of them. How many stickers does he have left?



Sarah gives half of her pencils to her sister. She has 23 pencils left. How many pencils did she have to begin with?



Rhian, Jia, Rasha, Carter, Mei and Aisha each threw the ball 5 times. How many times has the ball been thrown altogether?



Markus scores 7 points in a game. How many more points does he need to score to get to 20?

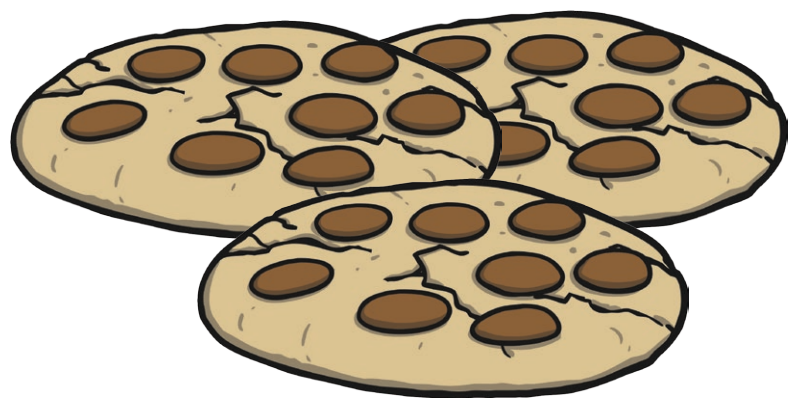


53 people are invited to a party and 24 of them say they can't come. How many people will be at the party?





Anna bakes 50 cookies and Aami bakes 45 cookies. How many cookies are there altogether?



Joni has 49 pieces of chocolate. He gives 24 pieces away. How many pieces of chocolate does he have left?



If 7 taxis arrive at the party at the same time, each carrying 5 passengers, how many guests arrive at once?



All four judges gave a dancer a score of 10. What is the dancer's total score?






Mathias is sharing fruity snacks equally between himself and his 4 brothers. If there are 25 fruity snacks, how many will they each receive?



A machine that makes sweets puts 10 in each packet. If the machine produces 70 sweets, how many packets can it fill?



Dan, Ola and Nikita scored 2 points each for their team in a game. What is the team's total score?



Rhian scores 4 points in a game. How many more points does he need to score to get to 20?



At the start of the day,  
16 books were shared out  
equally between 2 classes.  
How many books did each  
class receive?

