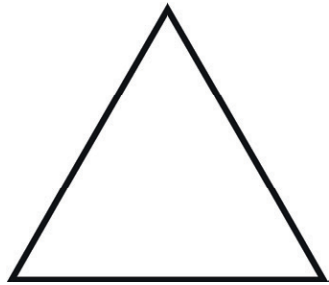



# Types of Triangles

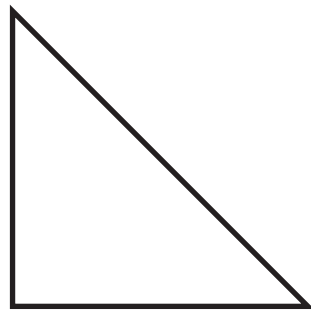
Look at the different type of triangles.



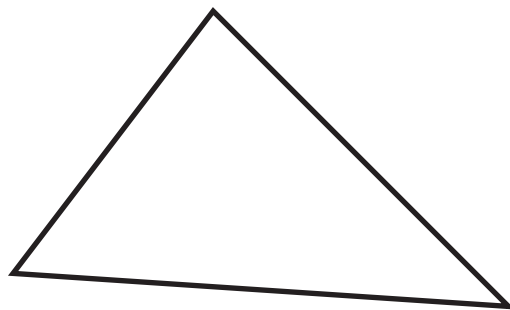
**Equilateral** - all sides equal.



**Isosceles** - two sides equal.



**Right Angle**  
- has a right angle. Can also be a scalene or isosceles.



**Scalene** - all sides different.

Name: \_\_\_\_\_

Date: \_\_\_\_\_

Write the type of triangle.

1.



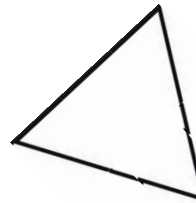
\_\_\_\_\_

2.



\_\_\_\_\_

3.



\_\_\_\_\_

4.



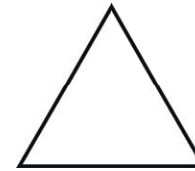
\_\_\_\_\_

5.



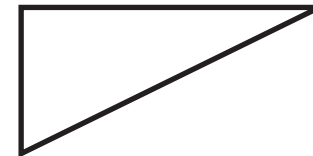
\_\_\_\_\_

6.



\_\_\_\_\_

7.



\_\_\_\_\_

8.



\_\_\_\_\_