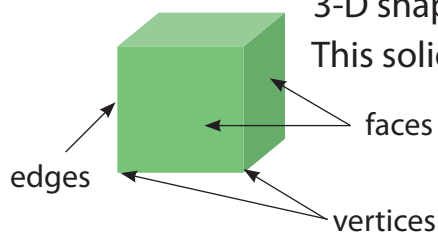


Name: _____

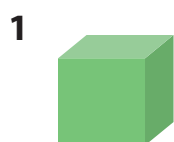
Subject: Year 3 Maths

Date: _____


Sheet: 3D Shapes**Example:**

3-D shapes are solid objects where as 2-D shapes are flat.
This solid shape is called a cube.

Look at these 3-D shapes then fill in the grid:



Cube



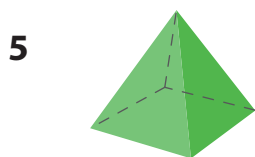
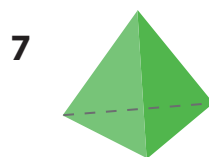
Cylinder



Cone



Sphere

Square based
PyramidTriangular
Prism

Tetrahedron

Trapezium
Prism

	Shape	Name	Faces	Edges	Vertices
a	1				
b	2				
c	3				
d	4				
e	5				
f	6				
g	7				
h	8				