







# 3D Shape Properties Table

Look carefully at the properties of these 3D shapes. Write your results in the table.

| 3D Shape   | Number of Straight Edges | Number of Curved Edges | Number of Vertices | Does it roll? | Does it Stack? |
|--|--------------------------|------------------------|--------------------|---------------|----------------|
|  <b>Cube</b>                |                          |                        |                    |               |                |
|  <b>Cylinder</b>            |                          |                        |                    |               |                |
|  <b>Sphere</b>              |                          |                        |                    |               |                |
|  <b>Cuboid</b>               |                          |                        |                    |               |                |
|  <b>Cone</b>              |                          |                        |                    |               |                |
|  <b>Triangular Pyramid</b> |                          |                        |                    |               |                |

twinkl.co.uk

What do your results tell you about the shapes? \_\_\_\_\_