

20. a How many  coins make  ?

b How many  coins make  ?

c How many  coins make  ?

21. How much **change** ?

a  

b  

22. What **times** are shown ?

a 

b 

c 

23. a What is the day just **before** Wednesday ?

b What day is **2 days after** Friday ?

24. Write down the time shown on each clock :-

a 

b 

c 

d 

25. How many **pencils** can fit on this strip of wood ?




26. Draw the **next** shape in these patterns :-


a 

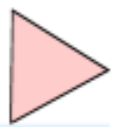
b 

27. Write the name of each **shape**. (Choose - circle, square, triangle, rectangle).

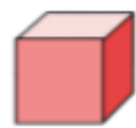
a 

b 

c 


d 

28. Write the name of each **object**. (Choose from cone, pyramid, cylinder, cube).

a 

b 

c 

d 

29. a Which fruit is **just in front** of the melon ?

b Which fruit is **just behind** the strawberry ?

c Which fruit is **at the back** ?

a b c

