














































## P6 Homework - Week Beginning 9<sup>th</sup> November 2020

Literacy and English	Numeracy and Mathematics	Interdisciplinary Learning																														
<p>Engage in personal reading (own choice) or access EPIC and choose an ebook.</p> <p style="text-align: center;">Class Code: <b>lrb1090</b></p> <div style="text-align: center;">  </div>	<p style="text-align: center;">Try the challenges for this week.</p> <div style="text-align: center;">  <span style="margin-left: 20px;">November CfE 2<sup>nd</sup> Level Calendar</span>  <span style="margin-left: 20px;">#abitofmathseveryday</span> </div> <table border="1" style="width: 100%; border-collapse: collapse; font-size: 8px;"> <tr> <td style="width: 16.6%;">1 How many lines of symmetry does this shape have? </td> <td style="width: 16.6%;">2 Simplify the fraction below... <math>\frac{18}{27}</math></td> <td style="width: 16.6%;">3 Write 40 009 in words</td> <td style="width: 16.6%;">4 Calculate 50% of £7</td> <td style="width: 16.6%;">5 A fireworks display started at 5:48 pm and finished at 6:17 pm. How long did the display last?</td> <td style="width: 16.6%;">6 Calculate <math>\frac{1}{4}</math> of 32</td> </tr> <tr> <td>7 <math>\begin{array}{r} 608 \\ + 347 \\ \hline \end{array}</math></td> <td>8 Write down the missing numbers from this number line... </td> <td>9 Change 327 seconds into minutes and seconds... </td> <td>10 <math>\begin{array}{r} 634 \\ \times 9 \\ \hline \end{array}</math></td> <td>11 What fraction of this shape is shaded? </td> <td>12 What is the name of this shape? How many sides does it have? How many vertices? </td> </tr> <tr> <td>13 Which of these are multiples of 8? 12, 24, 36, 48, 54</td> <td>14 State the type of angle and its range... </td> <td>15 What is the name of this 3D object? How many faces does it have? </td> <td>16 Calculate <math>12 - 4 \times 3</math></td> <td>17 <math>\begin{array}{r} 573 \\ - 289 \\ \hline \end{array}</math></td> <td>18 Round 6253 to the nearest 100...</td> </tr> <tr> <td>19 Calculate the area of this shape. </td> <td>20 Solve the equation below... <math>x + 4 = 11</math></td> <td>21 </td> <td>22 Calculate the size of the missing angle... </td> <td>23 Using the vocabulary of probability describe the actions of the following event... Picking a black playing card from a pack of cards.</td> <td>24 A box of 6 eggs is bought for £1.14. They are sold individually for 62p each. Calculate the total profit.</td> </tr> <tr> <td>25 What 3D object does this net form? </td> <td>26 Calculate the volume of the shape shown... </td> <td>27 List ALL the factors of 20...</td> <td>28 Write 6 metres and 7 centimetres as metres.</td> <td>29 I am facing south-east. What direction is on my right? </td> <td>30 Calculate: <math>3200 \div 40</math></td> </tr> </table>	1 How many lines of symmetry does this shape have? 	2 Simplify the fraction below... $\frac{18}{27}$	3 Write 40 009 in words	4 Calculate 50% of £7	5 A fireworks display started at 5:48 pm and finished at 6:17 pm. How long did the display last?	6 Calculate $\frac{1}{4}$ of 32	7 $\begin{array}{r} 608 \\ + 347 \\ \hline \end{array}$	8 Write down the missing numbers from this number line... 	9 Change 327 seconds into minutes and seconds... 	10 $\begin{array}{r} 634 \\ \times 9 \\ \hline \end{array}$	11 What fraction of this shape is shaded? 	12 What is the name of this shape? How many sides does it have? How many vertices? 	13 Which of these are multiples of 8? 12, 24, 36, 48, 54	14 State the type of angle and its range... 	15 What is the name of this 3D object? How many faces does it have? 	16 Calculate $12 - 4 \times 3$	17 $\begin{array}{r} 573 \\ - 289 \\ \hline \end{array}$	18 Round 6253 to the nearest 100...	19 Calculate the area of this shape. 	20 Solve the equation below... $x + 4 = 11$	21 	22 Calculate the size of the missing angle... 	23 Using the vocabulary of probability describe the actions of the following event... Picking a black playing card from a pack of cards.	24 A box of 6 eggs is bought for £1.14. They are sold individually for 62p each. Calculate the total profit.	25 What 3D object does this net form? 	26 Calculate the volume of the shape shown... 	27 List ALL the factors of 20...	28 Write 6 metres and 7 centimetres as metres.	29 I am facing south-east. What direction is on my right? 	30 Calculate: $3200 \div 40$	<p style="text-align: center;">Research facts about Remembrance Day - 11<sup>th</sup> November.</p> <div style="text-align: center;">  </div>
1 How many lines of symmetry does this shape have? 	2 Simplify the fraction below... $\frac{18}{27}$	3 Write 40 009 in words	4 Calculate 50% of £7	5 A fireworks display started at 5:48 pm and finished at 6:17 pm. How long did the display last?	6 Calculate $\frac{1}{4}$ of 32																											
7 $\begin{array}{r} 608 \\ + 347 \\ \hline \end{array}$	8 Write down the missing numbers from this number line... 	9 Change 327 seconds into minutes and seconds... 	10 $\begin{array}{r} 634 \\ \times 9 \\ \hline \end{array}$	11 What fraction of this shape is shaded? 	12 What is the name of this shape? How many sides does it have? How many vertices? 																											
13 Which of these are multiples of 8? 12, 24, 36, 48, 54	14 State the type of angle and its range... 	15 What is the name of this 3D object? How many faces does it have? 	16 Calculate $12 - 4 \times 3$	17 $\begin{array}{r} 573 \\ - 289 \\ \hline \end{array}$	18 Round 6253 to the nearest 100...																											
19 Calculate the area of this shape. 	20 Solve the equation below... $x + 4 = 11$	21 	22 Calculate the size of the missing angle... 	23 Using the vocabulary of probability describe the actions of the following event... Picking a black playing card from a pack of cards.	24 A box of 6 eggs is bought for £1.14. They are sold individually for 62p each. Calculate the total profit.																											
25 What 3D object does this net form? 	26 Calculate the volume of the shape shown... 	27 List ALL the factors of 20...	28 Write 6 metres and 7 centimetres as metres.	29 I am facing south-east. What direction is on my right? 	30 Calculate: $3200 \div 40$																											
<p>Write what you liked/disliked about your home reader or ebook.</p>	<p>Use your login details to access SUMDOG.</p>	<p>Write at least five facts about the artist Steven Brown.</p> <div style="text-align: center;">  </div>																														
<p>Access Studyladder</p>	<p>Revise times tables so that you can recall facts quickly.</p>	<p>This month is all about Safety. Create a poster about ways in which we can stay safe.</p>																														

Log on to your *Glow Team* and post your homework or ask your parent/carer to tweet on Twitter P6Smos, if possible.



## P6 Homework - Week Beginning 9<sup>th</sup> November 2020

Log on to your *Glow Team* and post your homework or ask your parent/carer to tweet on Twitter P6Smos, if possible.