

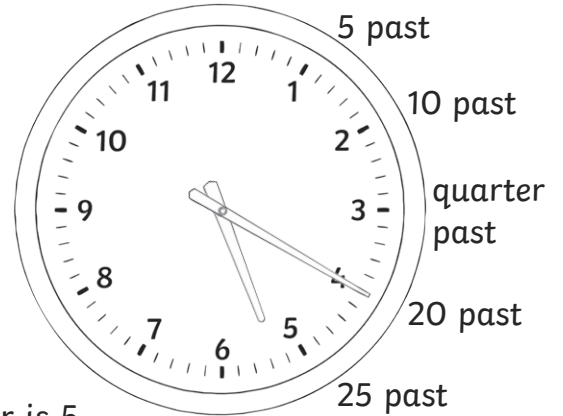



Five-Minute Digital Times

I can tell the time in 5-minute intervals using a digital clock.




Past the Hour Times








On these clocks, the hour is 5.
20 minutes have passed since the hour.
The time is 20 past 5.

1) Write the time in words under the digital clocks. The first one has been done for you.



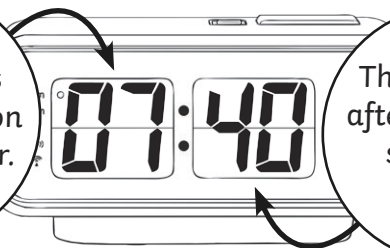
20 past 10



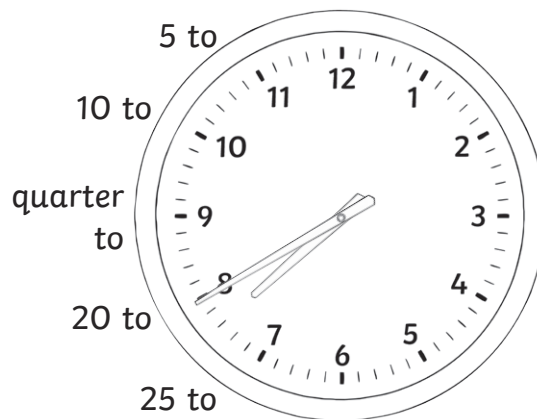


To the Hour Times

The numbers before the colon show the hour.



The numbers after the colon show the minutes.









On these clocks, the hour is 7.

40 minutes have passed since the hour.

Once the time has gone past 30, we say how many minutes are left to the next hour.

The time is 20 minutes to 8, or 20 to 8.

2) Write the time in words under the digital clocks.







To and Past the Hour Times

3) Write the time in words under the digital clocks.


a)




b)




c)




d)



e)



f)





Five-Minute Digital Times Answers

Question	Answer
1. Write the time in words under the digital clocks.	
a.	<i>20 past 10</i>
b.	<i>25 past 7</i>
c.	<i>quarter past 9</i>
d.	<i>5 past 6</i>
e.	<i>10 past 4</i>
f.	<i>20 past 11</i>
2. Write the time in words under the digital clocks.	
a.	<i>20 to 11</i>
b.	<i>10 to 7</i>
c.	<i>5 to 10</i>
d.	<i>25 to 7</i>
e.	<i>10 to 5</i>
f.	<i>20 to 9</i>
3. Write the time in words under the digital clocks.	
a.	<i>5 past 7</i>
b.	<i>10 to 10</i>
c.	<i>20 past 1</i>

Question	Answer
d.	<i>25 to 12</i>
e.	<i>25 past 1</i>
f.	<i>5 to 9</i>