

# Sharing in the Magical Forest Maths Challenge Cards

twinkl

Sharing in the Magical Forest Maths

1. The woodland squirrels have collected 12 acorns. Can you share the acorns between the 3 squirrels?



twinkl.com

Sharing in the Magical Forest Maths

2. There are 2 fairies at the fairy castle. Can you share 10 wands between them?



twinkl.com

Sharing in the Magical Forest Maths


3. The Pixie King gave the 5 Wonderful Wizards 15 jewels. Can you share the jewels between them?



twinkl.com

Sharing in the Magical Forest Maths


4. The sneaky imp has found 4 magical twigs. He is going to share them with his friend, the cheeky imp. How many magical twigs can they have each?



twinkl.com

Sharing in the Magical Forest Maths

5. The 3 Fairies of Brightleaf Forest have collected 9 beautiful icicles. They want to share them equally. How many icicles can they have each?



twinkl.com

Sharing in the Magical Forest Maths

6. There are 4 sleepy pixies waiting for their supper. Can you share out the 12 blueberries between them?



twinkl.com

Sharing in the Magical Forest Maths

7. Percy Pixie made 16 pancakes. There are 8 pixies coming to tea. How many pancakes can they have each?



twinkl.com

Sharing in the Magical Forest Maths


8. Dewdrop the fairy and Snowflake the Elf have made 14 flower garlands. Can you share them out fairly between the 2 friends?



twinkl.com

Sharing in the Magical Forest Maths

9. There are 5 small bushes in The Great Wizard's garden. He has made 10 magical firefly lamps. How many lamps can he put in each bush?



twinkl.com

Sharing in the Magical Forest Maths

10. The Fairy Queen brought 20 fairy cakes to the woodland party. There were 10 fairies at the party. Can you share the cakes out fairly?



twinkl.com