



Early Level

Baseline Assessment

Numeracy and Mathematics

| | |
|------|--|
| Name | |
| Date | |





Name:

Date:

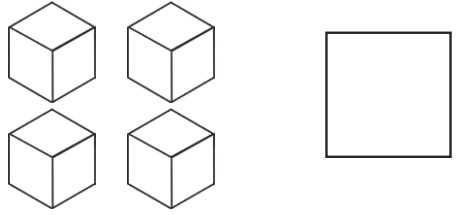
Early level baseline assessment

1. Complete:

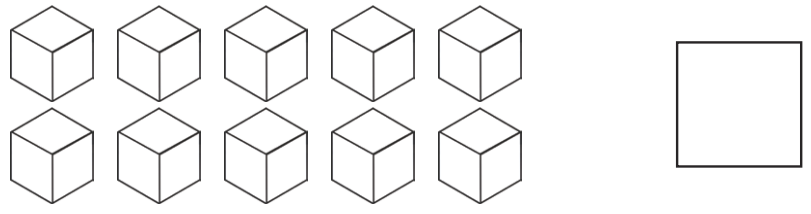
| Draw | Write |
|---|-------|
|  | 3 |
| | 1 |
|  | |
| | 2 |
| | 0 |

4 marks

2. How many?



2 marks



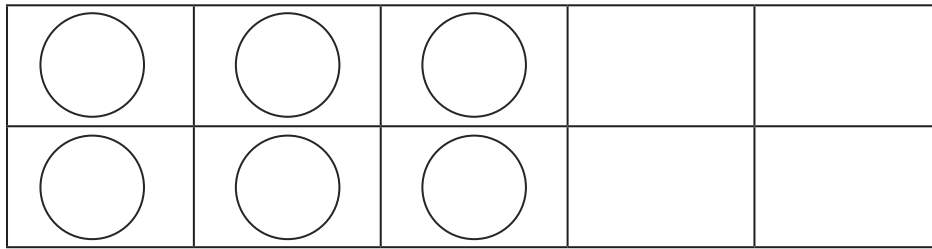
3. Count and complete:

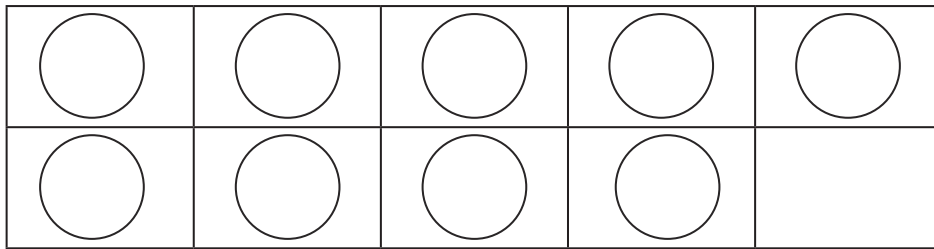
1, 2, 3, _____, _____, _____, _____, _____, _____
11, _____, _____, _____, _____, 16, _____, _____, _____, _____
21, _____, _____, _____, _____, _____, 27, _____, _____, _____
20, _____, _____, _____, _____, 15, _____, _____, _____, _____
10, 9, _____, _____, _____, _____, _____, _____, _____, _____

5 mark

total for
this page

4. How many?





5. Azim Ann Sasha Samira Adam

Whose name is third? _____

Whose name is next to Adam? _____

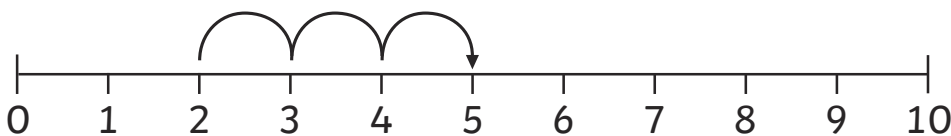
Whose name is in between Ann and Samira? _____

Whose name is after Azim's? _____

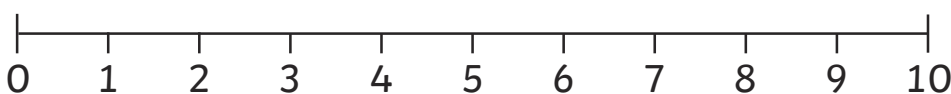
Whose name is before Samira's? _____

6. Use the number line to find the answer:

a) $2 + 3$



b) $8 - 4$



2 marks

5 marks

2 marks

total for this page

7. Find the doubles:

$2 + 2 = \underline{\hspace{2cm}}$

$3 + 3 = \underline{\hspace{2cm}}$

$5 + 5 = \underline{\hspace{2cm}}$

3 marks

8. Add and subtract:

$1 + 5 = \underline{\hspace{2cm}}$

$8 - 2 = \underline{\hspace{2cm}}$

$2 + 4 = \underline{\hspace{2cm}}$

$3 - 1 = \underline{\hspace{2cm}}$

4 marks

9. Find the missing symbol +, - or =.


$4 \underline{\hspace{0.5cm}} 4 = 8$

$5 \underline{\hspace{0.5cm}} 3 = 2$

$10 - 9 \underline{\hspace{0.5cm}} 1$

3 marks

10. Look at this pizza. Split it into 2 equal parts.




2 marks

Complete: Each part is one .

total for
this page

11. Share these sweets out so that each bag has an equal share.



1 mark

12. Match the coins.



1p

2p

5p

10p

20p

50p

£1

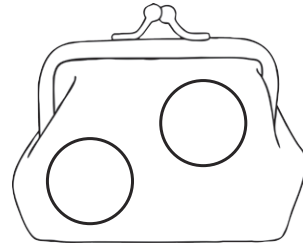
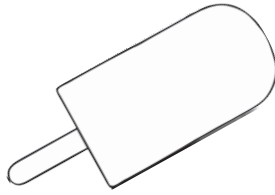
£2

8 marks


total for this page

13. What coins would you need?

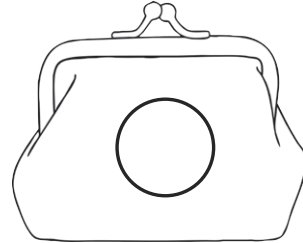
4p



9p



10p



14. How much is left?



-



=



-



=



-



=

3 marks

3 marks

3 marks

3 marks

total for this page

15. Complete the days of the week:

M _____, T _____, W _____, T _____,
 F _____, S _____, S _____.



3 marks

16. What are the months of the year?

| | | |
|---------|---------|---------|
| January | F _____ | _____ |
| _____ | M _____ | J _____ |
| J _____ | _____ | _____ |
| O _____ | N _____ | D _____ |

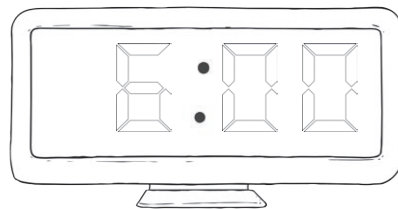
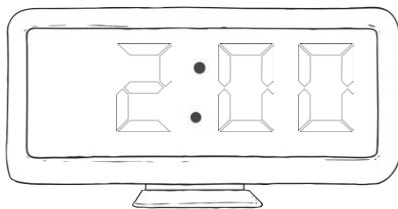
1 mark

17. Write the times. Use o'clock.



2 marks


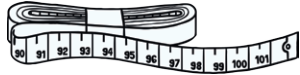


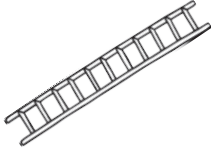





18. Write the times. Use o'clock.



2 marks


total for this page

19. Circle your answer:

| | | |
|-------------------|---|---|
| Which is longer? |  |  |
| Which is shorter? |  |  |
| Which is taller? |  |  |
| Which is heavier? |  |  |
| Which is lighter? |  |  |

5 marks

20. Complete the pattern:



1 mark

21. Complete the pattern:

0, 2, _____, _____, 8, _____, _____

1 mark

total for this page

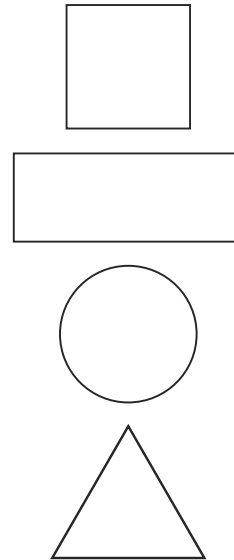
22. Match the words to the pictures:

circle

square

triangle

rectangle



5 marks







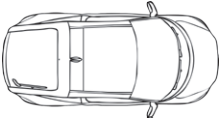




23. Circle the shapes:

| | | | |
|----------|--|--|--|
| cone | | | |
| cube | | | |
| cylinder | | | |
| cuboid | | | |
| sphere | | | |
| pyramid | | | |

6 marks

total for this page

24. Look at this map of the zoo:

| | | | |
|---|--|--|---|
| |  | |  |
| | |  | |
| | |  | |
|  | | |  |
|  |  |  | |
|  | | |  |

For each question, start from the car.

1. Go forward two squares. What do you see?

2. Go forward three squares. Turn right. Go forward one square. What do you see?


3. Go forward one square. Turn left. Go forward four squares. What do you see?

.....

3 marks


total for this page

25. Complete the picture so that it is symmetrical:



1 mark

26. Pets



How many ?

How many ?

How many ?

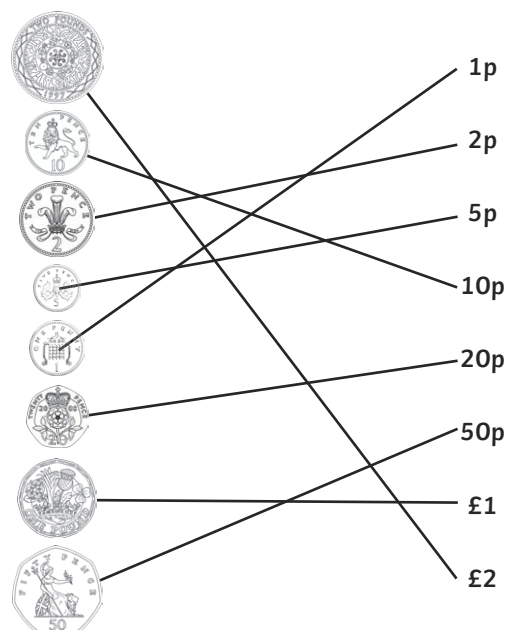
5 marks

Which pet is most common? _____
 Which pet is least common? _____


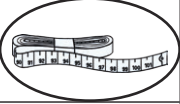























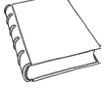








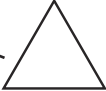








END OF TEST












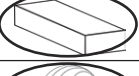











































total for this page




| Question | Answer | | | | | | | | | | | | |
|---|--------|-------|-------|---|---|---|-----------|---|-----|---|----------------|---|--|
| 1. (1 mark for each correct answer - 4 marks) | | | | | | | | | | | | | |
| <table border="1"> <thead> <tr> <th>Draw</th> <th>Write</th> </tr> </thead> <tbody> <tr> <td>○ ○ ○</td> <td>3</td> </tr> <tr> <td>○</td> <td>1</td> </tr> <tr> <td>○ ○ ○ ○ ○</td> <td>5</td> </tr> <tr> <td>○ ○</td> <td>2</td> </tr> <tr> <td>No shape drawn</td> <td>0</td> </tr> </tbody> </table> | Draw | Write | ○ ○ ○ | 3 | ○ | 1 | ○ ○ ○ ○ ○ | 5 | ○ ○ | 2 | No shape drawn | 0 | |
| Draw | Write | | | | | | | | | | | | |
| ○ ○ ○ | 3 | | | | | | | | | | | | |
| ○ | 1 | | | | | | | | | | | | |
| ○ ○ ○ ○ ○ | 5 | | | | | | | | | | | | |
| ○ ○ | 2 | | | | | | | | | | | | |
| No shape drawn | 0 | | | | | | | | | | | | |
| 2. How many? (1 mark for each correct answer - 2 marks) | | | | | | | | | | | | | |
| 4, 10. | | | | | | | | | | | | | |
| 3. Count and complete: (1 mark for each correct sequence - 5 marks) | | | | | | | | | | | | | |
| 1, 2, 3, 4, 5, 6, 7, 8, 9, 10 | | | | | | | | | | | | | |
| 11, 12, 13, 14, 15, 16, 17, 18, 19, 20 | | | | | | | | | | | | | |
| 21, 22, 23, 24, 25, 26, 27, 28, 29, 30 | | | | | | | | | | | | | |
| 20, 19, 18, 17, 16, 15, 14, 13, 12, 11 | | | | | | | | | | | | | |
| 10, 9, 8, 7, 6, 5, 4, 3, 2, 1, 0 | | | | | | | | | | | | | |
| 4. How many? (1 mark for each correct answer - 2 marks) | | | | | | | | | | | | | |
| 6, 9 | | | | | | | | | | | | | |
| 5. (1 mark for each correct answer - 5 marks) | | | | | | | | | | | | | |
| Sasha | | | | | | | | | | | | | |
| Samira | | | | | | | | | | | | | |
| Sasha | | | | | | | | | | | | | |
| Ann | | | | | | | | | | | | | |
| Sasha | | | | | | | | | | | | | |
| 6. (1 mark for each correct answer - 2 marks) | | | | | | | | | | | | | |
| 5, 4 | | | | | | | | | | | | | |
| 7. (1 mark for each correct answer - 3 marks) | | | | | | | | | | | | | |
| 4, 6, 10 | | | | | | | | | | | | | |
| 8. (1 mark for each correct answer - 4 marks) | | | | | | | | | | | | | |
| 6, 6, 6, 2 | | | | | | | | | | | | | |
| 9. (1 mark for each correct answer - 3 marks) | | | | | | | | | | | | | |
| + - = | | | | | | | | | | | | | |

| Question | Answer |
|---|--------|
| 10. (1 mark for each correct action/answer - 2 marks) | |
| Pizza split into 2 equal parts. | |
| Each part is one half . | |
| 11. (1 mark for the correct answer) | |
| 3 sweets in each. | |
| 12. Match the coins. (1 mark for the correct answer - 8 marks) | |
| Each value and coin correctly matched. | |
|  | |
| 13. What coins would you need? (1 mark for the correct answer - 3 marks) | |
| 4p - Coins 2p, 2p | |
| 9p - Coins 5p, 2p, 2p | |
| 10p - Coins 10p | |
| 14. How much is left? (1 mark for the correct answer - 3 marks) | |
| 5p | |
| 8p | |
| 3p | |
| 15. Complete the days of the week: (All days correctly sequenced - 1 mark) | |
| Monday, Tuesday, Wednesday, Thursday, Friday, Saturday, Sunday. | |

| Question | Answer |
|---|--|
| 16. What are the months of the year? (All months correctly sequenced - 1 mark) | |
| | January, February, March, April, May, June, July, August, September, October, November, December. |
| 17. Write the times. Use o'clock. (Each time correctly identified - 2 marks) | |
| | 4 o'clock, 9 o'clock |
| 18. Write the times. Use o'clock. (Each time correctly identified - 2 marks) | |
| | 2 o'clock, 6 o'clock |

| Question | Answer | | | | | | | | |
|---|--|---|---|--------|---|----------|---|-----------|---|
| 19. Circle your answer: (1 mark for each item correctly identified - 5 marks) | | | | | | | | | |
| Which is longer? | <table border="1"> <tr> <td></td> <td></td> </tr> </table> |  |  | | | | | | |
|  |  | | | | | | | | |
| Which is shorter? | <table border="1"> <tr> <td></td> <td></td> </tr> </table> |  |  | | | | | | |
|  |  | | | | | | | | |
| Which is taller? | <table border="1"> <tr> <td></td> <td></td> </tr> </table> |  |  | | | | | | |
|  |  | | | | | | | | |
| Which is heavier? | <table border="1"> <tr> <td></td> <td></td> </tr> </table> |  |  | | | | | | |
|  |  | | | | | | | | |
| Which is lighter? | <table border="1"> <tr> <td></td> <td></td> </tr> </table> |  |  | | | | | | |
|  |  | | | | | | | | |
| 20. Complete the pattern: (Correct pattern continued - 1 mark) | | | | | | | | | |
| |  | | | | | | | | |
| 21. Complete this number pattern: (Sequence correctly completed - 1 mark) | | | | | | | | | |
| | <p>The rule is to add 2.</p> <p>0, 2, 4, 6, 8, 10, 12</p> | | | | | | | | |
| 22. Match the words to the pictures: (Shapes correctly identified - 1 mark each - 4 marks) | | | | | | | | | |
| | <table border="1"> <tr> <td>circle</td> <td></td> </tr> <tr> <td>square</td> <td></td> </tr> <tr> <td>triangle</td> <td></td> </tr> <tr> <td>rectangle</td> <td></td> </tr> </table> | circle |  | square |  | triangle |  | rectangle |  |
| circle |  | | | | | | | | |
| square |  | | | | | | | | |
| triangle |  | | | | | | | | |
| rectangle |  | | | | | | | | |

| Question | Answer | | | | | | | | | | | | | | | | | | | | | | | | |
|---|---|---|---|---|------|---|---|---|----------|---|---|---|--------|---|---|---|--------|---|---|---|---------|---|---|---|--|
| 23. Circle the shapes: (Shapes correctly identified - 1 mark each - 6 marks) | | | | | | | | | | | | | | | | | | | | | | | | | |
| <table border="1"> <tbody> <tr> <td>cone</td> <td></td> <td></td> <td></td> </tr> <tr> <td>cube</td> <td></td> <td></td> <td></td> </tr> <tr> <td>cylinder</td> <td></td> <td></td> <td></td> </tr> <tr> <td>cuboid</td> <td></td> <td></td> <td></td> </tr> <tr> <td>sphere</td> <td></td> <td></td> <td></td> </tr> <tr> <td>pyramid</td> <td></td> <td></td> <td></td> </tr> </tbody> </table> | cone |  |  |  | cube |  |  |  | cylinder |  |  |  | cuboid |  |  |  | sphere |  |  |  | pyramid |  |  |  | |
| cone |  |  |  | | | | | | | | | | | | | | | | | | | | | | |
| cube |  |  |  | | | | | | | | | | | | | | | | | | | | | | |
| cylinder |  |  |  | | | | | | | | | | | | | | | | | | | | | | |
| cuboid |  |  |  | | | | | | | | | | | | | | | | | | | | | | |
| sphere |  |  |  | | | | | | | | | | | | | | | | | | | | | | |
| pyramid |  |  |  | | | | | | | | | | | | | | | | | | | | | | |
| 24. (1 mark for each correct answer - 3 marks) | | | | | | | | | | | | | | | | | | | | | | | | | |
| 1. Go forward two squares. What do you see? Penguin | | | | | | | | | | | | | | | | | | | | | | | | | |
| 2. Go forward three squares. Turn right. Go forward one square. What do you see? Meerkat | | | | | | | | | | | | | | | | | | | | | | | | | |
| 3. Go forward one square. Turn left. Go forward four squares. What do you see? Tiger | | | | | | | | | | | | | | | | | | | | | | | | | |
| 25. Complete the image: (1 mark for completed image) | | | | | | | | | | | | | | | | | | | | | | | | | |
|  | | | | | | | | | | | | | | | | | | | | | | | | | |

| Question | Answer |
|--|--------|
| 26. Circle your answer: (1 mark for each correct answer - 5 marks) | |
| How many  ? | 6 |
| How many  ? | 5 |
| How many  ? | 3 |
| Which pet is most common? dog | |
| Which pet is least common? fish | |