

Name: _____

Shopping choices

Activity sheet


There are lots of different places people can spend money. You might go to your local high street or supermarket with your family to buy food, or perhaps you get everything delivered to your door with an online food order.

There is no need for us to always spend money in the same place. Different people like shopping in different ways at different times to suit their lifestyle and personal preferences.



Part 1

Place the statement or letter into the table below where you think they are best suited.



Online shopping (using the internet)	In-store shopping (going into a shop)

- A. Easy and quick to buy things.
- B. Your shopping might get delivered when you are out or at an inconvenient time.
- C. You can chat to people when in the shop.
- D. You don't have to leave your house to do your shopping.
- E. You do have to leave your house to do your shopping.
- F. You can see/touch/try an item before buying it.
- G. You cannot use cash to buy items.
- H. Spending money can sometimes be stressful as there are lots of people and queues.

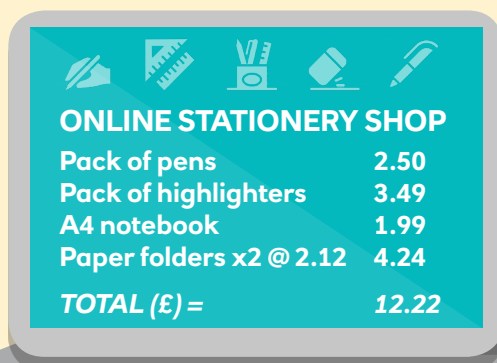
Name: _____

Shopping choices


Activity sheet

Part 2

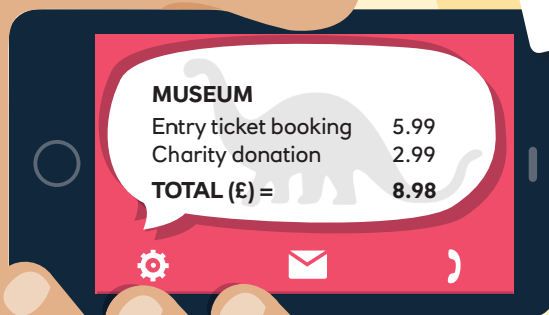
Try and work out how much a shopper called Jason spent online and instore on both days.



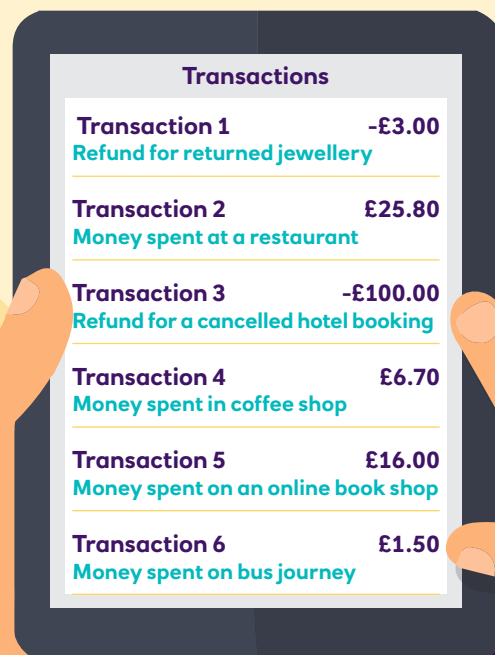
ONLINE STATIONERY SHOP	
Pack of pens	2.50
Pack of highlighters	3.49
A4 notebook	1.99
Paper folders x2 @ 2.12	4.24
TOTAL (£) =	12.22



SUPERMARKET	
Loaf of bread	1.81
Apple juice	2.50
Milk (2 pints)	0.80
Eggs (half a dozen)	1.40
Cheddar cheese	4.00
Chicken drumsticks	2.50
Fish fingers	4.50
Iceberg lettuce	0.35
Tomatoes	2.00
Strawberries	1.50
Bananas	0.69
Chocolate biscuits	2.50
Rice cakes	1.25
Pasta sauce jar	1.00
Peanut butter jar	2.00
TOTAL (£) =	28.80
THANK YOU	



MUSEUM	
Entry ticket booking	5.99
Charity donation	2.99
TOTAL (£) =	8.98



Transactions	
Transaction 1	-£3.00
Refund for returned jewellery	
Transaction 2	£25.80
Money spent at a restaurant	
Transaction 3	-£100.00
Refund for a cancelled hotel booking	
Transaction 4	£6.70
Money spent in coffee shop	
Transaction 5	£16.00
Money spent on an online book shop	
Transaction 6	£1.50
Money spent on bus journey	

Discussion point:

Do you think it is easier to track spending with online banking or using paper receipts? Explain your answer