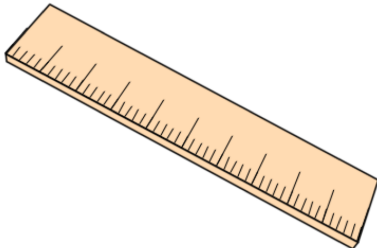


## Primary Practice Questions



# Time



### Tips

- Read each question carefully
- Attempt every question.
- Check your answers seem right.
- Always show your workings

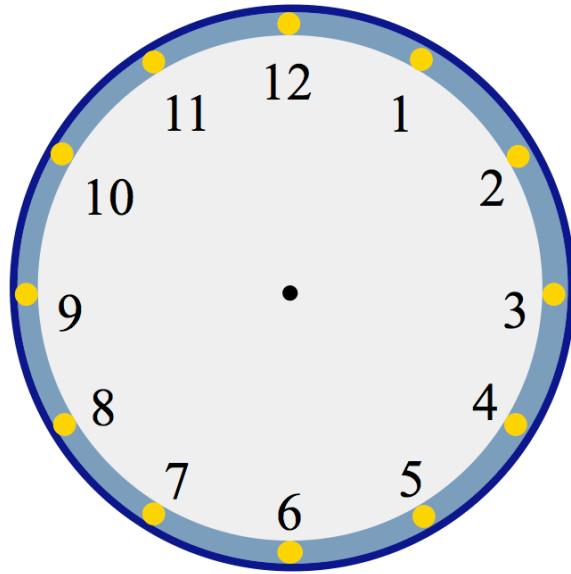
### Recap



### Remember

- There are daily questions found at  
[www.corbettmathsprimary.com/5-a-day/](http://www.corbettmathsprimary.com/5-a-day/)

1. Show the time **twenty to six** on the clock



- 2.



What time is shown on the clock?

minutes past

3. A television programme begins at 7:30pm

The television programme ends at 8:15pm

How long did the television programme last?

---

4. How many seconds are in one minute?

How many minutes are in one hour?

How many hours are there in one day?

How many days are there in one week?

How many days are there in August?

How many months are in one year?

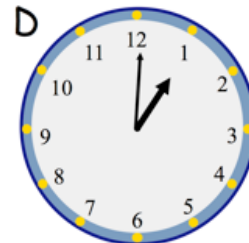
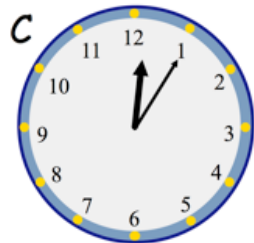
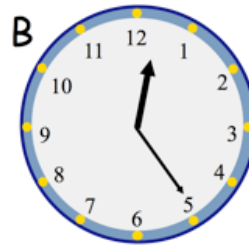
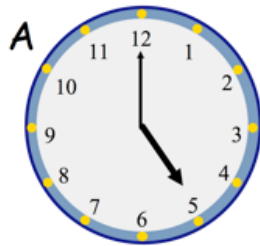
How many days are there in a year? (not a leap year)

How many days are there in a leap year?

How many years are in a decade?

How many years are in a century?

5.



Which clock shows **five past twelve**?

Which clock shows **five o'clock**?

6. A clock shows this time

1 : 32 PM

How long is it until 2pm?

---

7. Chloe is late arriving at school.

She is meant to arrive at school at 8:45am

The clock shows the time she arrived.

9 : 14 AM

How many minutes late is she?

8. Carlos does his French and English homework.

It takes him a total of **two hours**.

He spends **80** minutes doing his English homework.

How many **minutes** does he spend doing his French homework?


---

9. How many seconds are there in **five minutes**?

---

10. A train leaves Bath at 5:55pm

It takes 23 minutes to reach Bradford-on-Avon



What time does the train arrive in Bradford-on-Avon?

11. Lauren has split ink on her calendar



Which month is shown, June or July?

What day is the 17<sup>th</sup> ?



12. A clock shows this time twice a day



Circle the two digital clocks that show this time

20:40

08:40

04:40

16:40

17:40

---

13. In 1999, the 28<sup>th</sup> September was a Tuesday.

What day was the 3<sup>rd</sup> October?

14. What is 235 minutes in hours and minutes?

hours    minutes

---

15. Write these times in order, starting with the shortest

35 days    3 weeks    1 month    240 hours

shortest

longest

16. How many minutes are there in a day?

---

17. Dexter finished a puzzle in 44 minutes 19 seconds

Theresa finished 9 minutes 50 seconds **after** Dexter.

How long did Theresa take?

minutes      seconds

Selina finished 6 minutes 27 seconds **before** Dexter.

How long did Selina take?

minutes      seconds

18. Connor's watch is 17 minutes **slow**  
Joseph's watch is 5 minutes **fast**

The time on Joseph's watch is 19:01

What time is shown on Connor's watch?