




Money Questions 1

3 children get different amounts of pocket money each. They each buy one of the items below. How much pocket money do they have left after they have been to the shops each time?

		
Carl £18	Leroy £12	Greg £22

1. Sweets £2
2. Tee shirt £5
3. Hula Hoop £4
4. Tennis set £6
5. Football £8
6. Shoes £15
7. Paints £10
8. Shower Gel £3
9. CD £12

Challenge:



How much more than Carl does Greg get?

How much more than Leroy does Carl get?

If Leroy and Carl put their money together, how much more do they have than Greg?

Money Questions 2

Look at the items below and use addition to work out the total cost of each person's shopping list.


			
Jigsaw £12	Yo-Yo £13	Ball £19	Rocking Horse £40
			
Teddy £25	Balloons £21	Car £59	Bicycle £99

Name	Item 1	Item 2
Hugh	Jigsaw	Rocking Horse
Pugh	Balloon	Teddy
Barney	Teddy	Yo-Yo
McGrew	Car	Ball
Cuthbert	Rocking Horse	Bicycle
Dibble	Car	Jigsaw
Grub	Bicycle	Balloons
Shanweeka	Ball	Teddy

Money Questions 3

Below is a price list for a sandwich shop.

Work out how much each person spends on their sandwiches.



Filling	Cost
Chicken	£2.50
Ham	£2.25
Roast Beef	£3.10
Tuna	£2.35
Egg	£1.99
Bacon	£2.89
Sausage	£2.79
Cheese	£1.77
Chicken Tikka	£3.14
Salmon	£3.29

1. 2 Tuna
2. 2 Ham
3. 2 Sausage
4. 1 Egg and 1 Cheese
5. 1 Chicken and 1 Bacon
6. 1 Salmon and 1 Tuna
7. 2 Roast Beef and 1 Ham
8. 1 Bacon, 1 Sausage and 1 Egg
9. 2 Salmon and 2 Cheese
10. 1 Chicken Tikka, 1 Sausage and 1 Egg.
11. 1 Ham, 2 Bacon, 1 Salmon
12. Which 3 sandwiches would you choose?
13. If you buy one of each sandwich, how much would your bill be?