







9/3/21

Time- am and pm


Answer the questions in your jotter.


Our Day Out by Class 3


| | | |
|--|---|---|
|  <p>On the bus</p> <p>8.15 am</p> |  <p>Eating our snack</p> <p>12.30 pm</p> |  <p>At the pond</p> <p>2.15 pm</p> |
|  <p>At the farm</p> <p>9.00 am</p> |  <p>In the park</p> <p>10.45 am</p> |  <p>Back to school</p> <p>3.45 pm</p> |

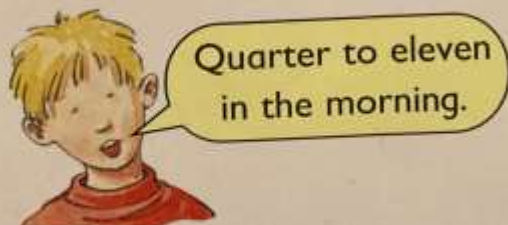
1 Where was Class 3 (a) before 12 noon (b) after 12 noon?


2 Write these times. Use am or pm.

(a)  Quarter past ten

(b)  Eight o'clock

(c)  Half past three

(d)  Quarter to eleven in the morning.

(e)  Four o'clock in the afternoon.

3 Draw two things **you** do

(a) before 10.30 am

(b) after 4.45 pm.