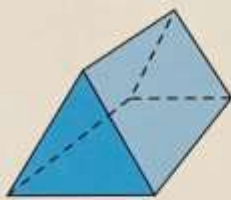


Monday 1st March

Properties of 3D Shape

Answer these questions in your jotter.

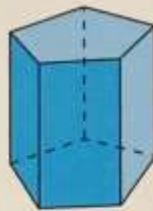
1 Name each shape.



A



B



C

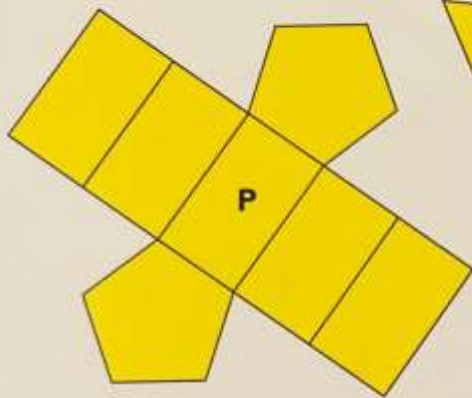


D

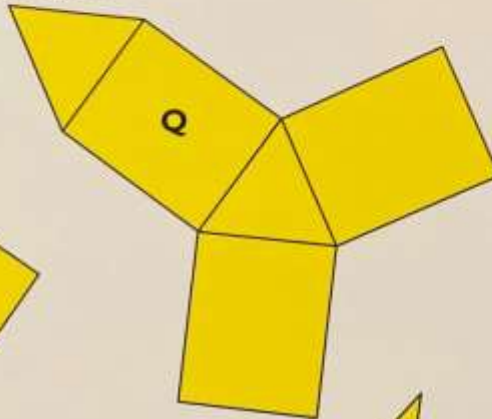


E

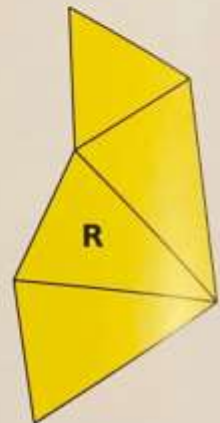
2 Match each shape from question 1 to its net.



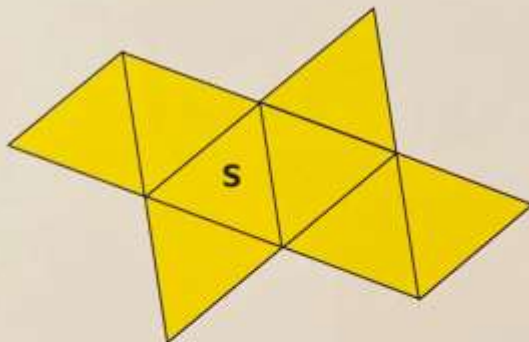
P



Q



R



S



T

- 3 Sketch a net of
(a) a hexagonal prism
(b) a hexagonal pyramid.

Check, if you need to, by making the net and the shape.

