









Monday 1st March




Properties of 3D Shape

Answer these questions in your jotter.

1 Match each shape to its name.

(a) 	(b) 	(c) 	(d) 
(e) 	(f) 	(g) 	(h) 
<div>sphere</div> <div>cuboid</div>	<div>triangular prism</div> <div>hemisphere</div>	<div>cube</div> <div>pyramid</div>	<div>cone</div> <div>cylinder</div>

4 Which 3D shape is each person describing?

(a) 	(b) 
It has two flat faces and one curved face.	It has one curved face and no flat faces.
(c) 	
It has one curved face and one flat face. It is not a cone.	