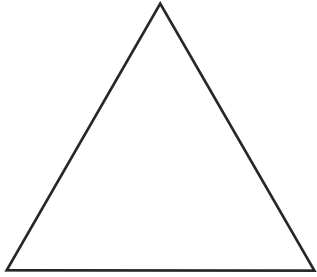


# Lines of Symmetry

Name: \_\_\_\_\_ Date: \_\_\_\_\_

Draw as many lines of symmetry as you can.


1.



How many lines of symmetry?

\_\_\_\_\_

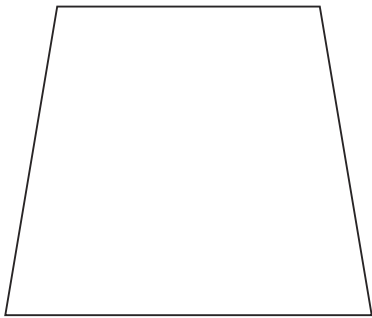
2.



How many lines of symmetry?

\_\_\_\_\_


3.



How many lines of symmetry?

\_\_\_\_\_


4.



How many lines of symmetry?

\_\_\_\_\_

5.



How many lines of symmetry?

\_\_\_\_\_