

Roald Dahl

Maths Challenge Cards

twinkl

Roald Dahl

Maths Challenge Cards ★


1. Boggis was counting his chickens in the morning. Last night, he had 12 chickens. This morning, he has 5 less. How many chickens does he have left?



Roald Dahl

Maths Challenge Cards ★

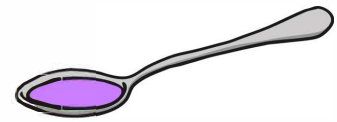
2. Matilda decided to teach Mrs Trunchbull a lesson. Mrs Trunchbull started with 12 pens but could only find 4 when she sat down. How many did Matilda hide?



Roald Dahl

Maths Challenge Cards ★

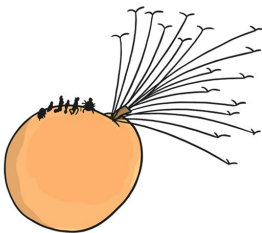
3. George poured out his grandma's medicine. There were 8 spoonfuls in the jar to begin with and he poured out 3 spoons. How many spoonfuls were left in the jar?



Roald Dahl

Maths Challenge Cards ★

4. James wanted to visit lots of countries in the giant peach. There were 13 he wanted to visit. They went to 8 of them. How many were left to visit?



Roald Dahl

Maths Challenge Cards ★

5. Mr Fox steals five chickens on Monday, three chickens on Tuesday and four on Wednesday. How many chickens did he steal altogether?



Roald Dahl

Maths Challenge Cards ★

6. Mrs Twit is combing Mr Twit's beard. She finds two fingernails, five cornflakes and three slugs. How many things did she find altogether?



Roald Dahl

Maths Challenge Cards ★

7. The BFG is filling up his case with dream jars. His case holds 12 jars. He has 5 jars so far. How many more does he need to put in to fill it?

