














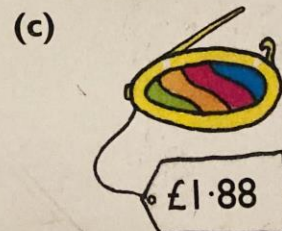
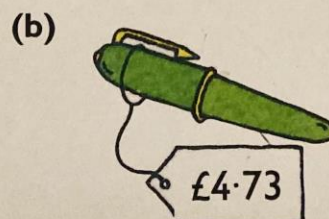

# 1 How much?

- (a)   
- (b)   
- (c)   
- (d)   

## 2 Who has more money?



## 3 Lay out coins to buy each item. List the coins.





1 How many of each coin to make £2?

(a)



(b)



(c)



(d)



2 How much?

(a)



(b)



3 List coins to buy each item. Use as few coins as possible.

(a)



£2.80

(b)



£5.43

(c)



£9.65

(d)



£7.98

4 Which item is the (a) most expensive (b) least expensive?

5 Choose from these coins.  
List four **different** ways of making £5.

