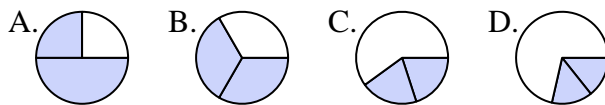




Determine which letter best represents each fraction.

Answers

1) Which choice best shows $\frac{2}{3}$?



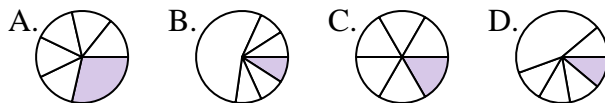
1. _____

2) Which choice best shows $\frac{3}{4}$?



2. _____

3) Which choice best shows $\frac{1}{6}$?



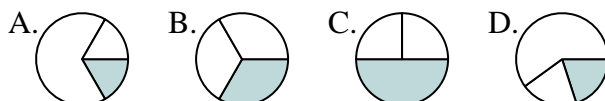
4. _____

4) Which choice best shows $\frac{3}{8}$?



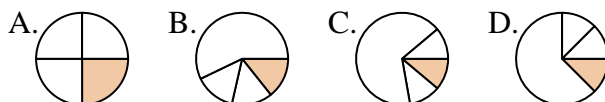
6. _____

5) Which choice best shows $\frac{1}{3}$?



7. _____

6) Which choice best shows $\frac{1}{4}$?



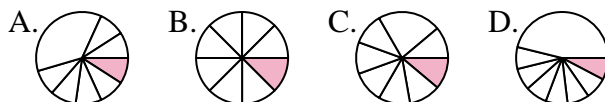
9. _____

7) Which choice best shows $\frac{4}{6}$?



10. _____

8) Which choice best shows $\frac{1}{8}$?



12. _____

9) Which choice best shows $\frac{2}{4}$?



10) Which choice best shows $\frac{2}{6}$?



11) Which choice best shows $\frac{2}{8}$?



12) Which choice best shows $\frac{5}{6}$?

