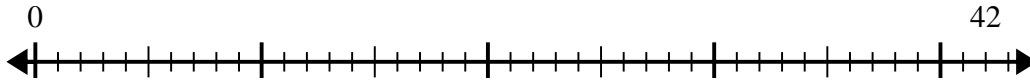


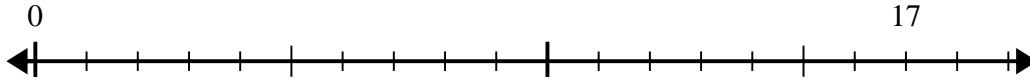


Use the number line to solve the division problem.

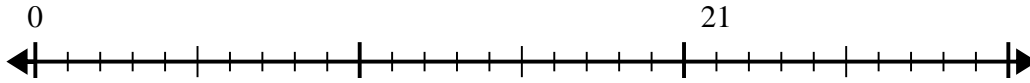
1) $42 \div 5 =$



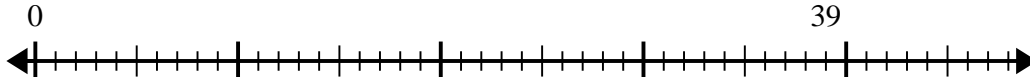
2) $17 \div 5 =$



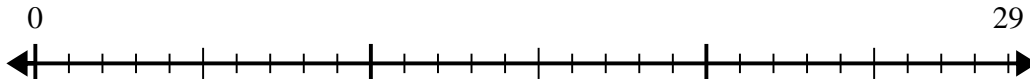
3) $21 \div 4 =$



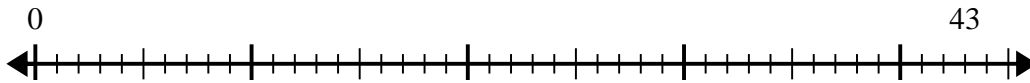
4) $39 \div 5 =$



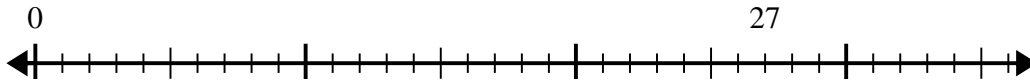
5) $29 \div 6 =$



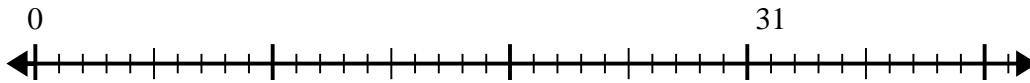
6) $43 \div 8 =$



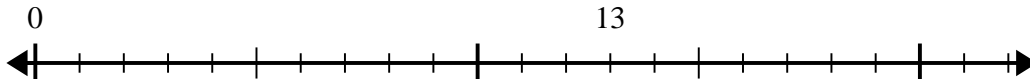
7) $27 \div 4 =$



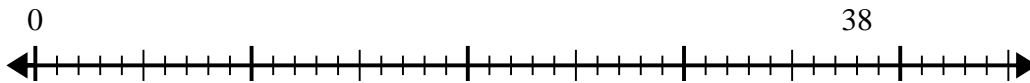
8) $31 \div 5 =$



9) $13 \div 4 =$



10) $38 \div 8 =$



Answers

1. _____
2. _____
3. _____
4. _____
5. _____
6. _____
7. _____
8. _____
9. _____
10. _____