




Solve each problem.


Answers

1) Which letter best shows -96?



1. _____

2) Which letter best shows -40?




2. _____

3) Which letter best shows -104?




3. _____

4) Which letter best shows -49?




4. _____

5) Which letter best shows -110?




5. _____

6) Which letter best shows -24?




6. _____

7) Which letter best shows -72?



7. _____

8) Which letter best shows -39?




8. _____

9) Which letter best shows -95?



9. _____

10) Which letter best shows -102?



10. _____