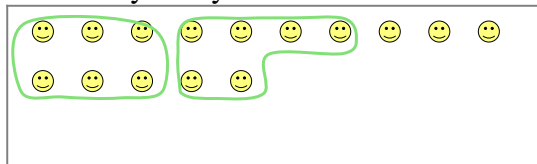





Use the shapes provided to answer the questions.

Ex) There are 15 shapes below. How many groups of 6 can you make with them?  
How many will you have left over?



1) There are 27 shapes below. How many groups of 5 can you make with them?  
How many will you have left over?



**Answers**

Ex. 2

Ex. 3

1a. \_\_\_\_\_

1b. \_\_\_\_\_

2a. \_\_\_\_\_

2b. \_\_\_\_\_

3a. \_\_\_\_\_

3b. \_\_\_\_\_

4a. \_\_\_\_\_

4b. \_\_\_\_\_

5a. \_\_\_\_\_

5b. \_\_\_\_\_

6a. \_\_\_\_\_

6b. \_\_\_\_\_

7a. \_\_\_\_\_

7b. \_\_\_\_\_

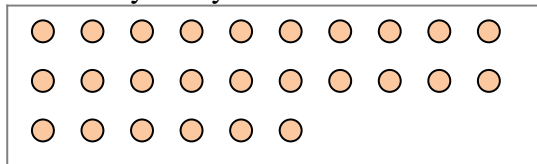
8a. \_\_\_\_\_

8b. \_\_\_\_\_

9a. \_\_\_\_\_

9b. \_\_\_\_\_

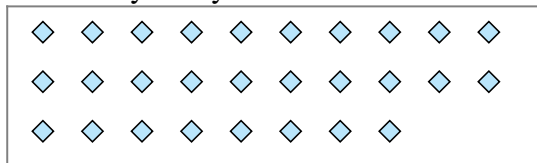
2) There are 26 shapes below. How many groups of 4 can you make with them?  
How many will you have left over?



3) There are 23 shapes below. How many groups of 9 can you make with them?  
How many will you have left over?




4) There are 28 shapes below. How many groups of 2 can you make with them?  
How many will you have left over?



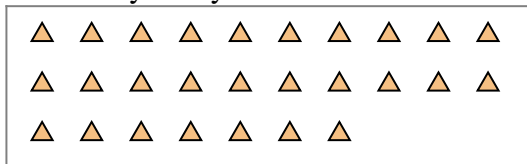
5) There are 14 shapes below. How many groups of 4 can you make with them?  
How many will you have left over?



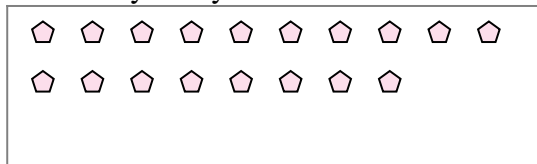
6) There are 18 shapes below. How many groups of 5 can you make with them?  
How many will you have left over?



7) There are 27 shapes below. How many groups of 6 can you make with them?  
How many will you have left over?



8) There are 18 shapes below. How many groups of 3 can you make with them?  
How many will you have left over?



9) There are 14 shapes below. How many groups of 3 can you make with them?  
How many will you have left over?

