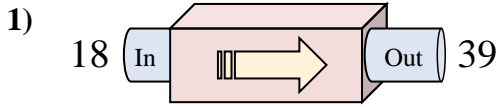
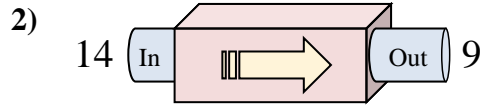




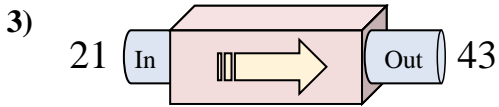
Determine which rule the function machine is using.



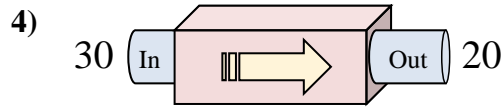
- A. Subtract 16
- B. Add 21
- C. Add 22
- D. Add 26



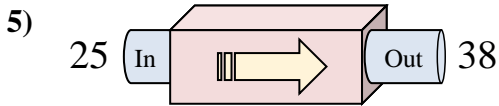
- A. Add 8
- B. Add 10
- C. Subtract 2
- D. Subtract 5



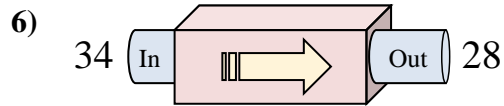
- A. Add 17
- B. Add 22
- C. Add 23
- D. Add 26



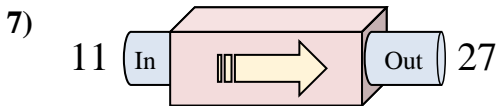
- A. Subtract 11
- B. Subtract 9
- C. Subtract 10
- D. Subtract 6



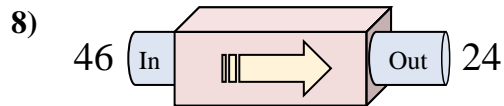
- A. Subtract 13
- B. Add 16
- C. Add 13
- D. Add 14



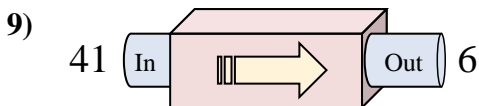
- A. Subtract 11
- B. Subtract 6
- C. Add 5
- D. Subtract 4



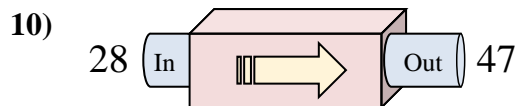
- A. Add 16
- B. Add 14
- C. Subtract 16
- D. Add 18



- A. Subtract 22
- B. Subtract 20
- C. Add 23
- D. Add 22



- A. Subtract 30
- B. Subtract 39
- C. Subtract 35
- D. Subtract 33



- A. Add 17
- B. Add 19
- C. Add 20
- D. Add 14

Answers

1. _____
2. _____
3. _____
4. _____
5. _____
6. _____
7. _____
8. _____
9. _____
10. _____