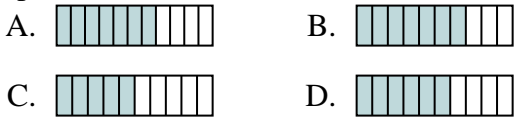




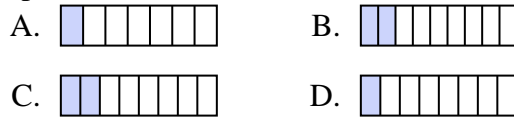
Determine which choice best answers each question.

**Answers**

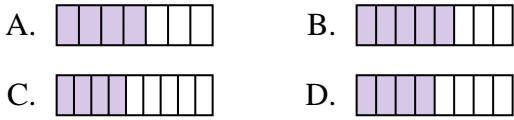
1) Which of the shapes below is shaded to represent  $\frac{6}{10}$ ?



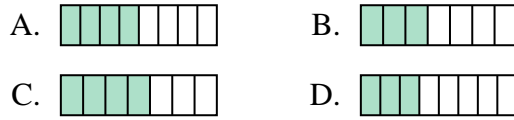
2) Which of the shapes below is shaded to represent  $\frac{2}{8}$ ?



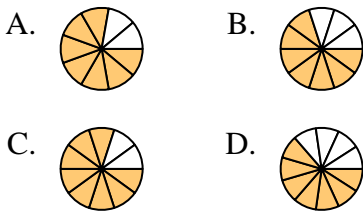
3) Which of the shapes below is shaded to represent  $\frac{4}{8}$ ?



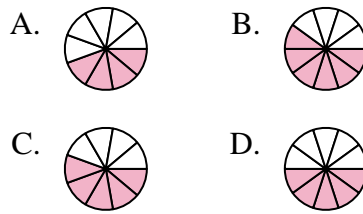
4) Which of the shapes below is shaded to represent  $\frac{3}{7}$ ?



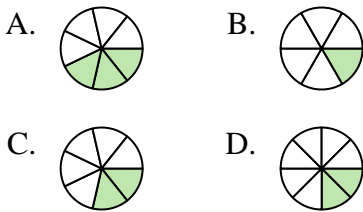
5) Which of the shapes below is shaded to represent  $\frac{7}{10}$ ?



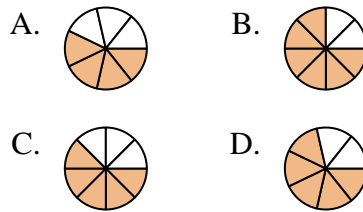
6) Which of the shapes below is shaded to represent  $\frac{5}{10}$ ?



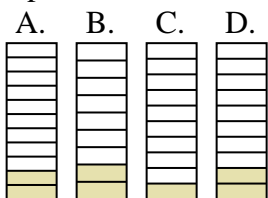
7) Which of the shapes below is shaded to represent  $\frac{2}{7}$ ?



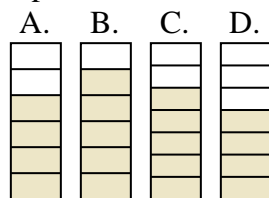
8) Which of the shapes below is shaded to represent  $\frac{5}{8}$ ?



9) Which of the shapes below is shaded to represent  $\frac{2}{10}$ ?



10) Which of the shapes below is shaded to represent  $\frac{5}{7}$ ?



1. \_\_\_\_\_
2. \_\_\_\_\_
3. \_\_\_\_\_
4. \_\_\_\_\_
5. \_\_\_\_\_
6. \_\_\_\_\_
7. \_\_\_\_\_
8. \_\_\_\_\_
9. \_\_\_\_\_
10. \_\_\_\_\_