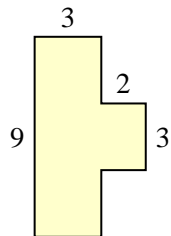




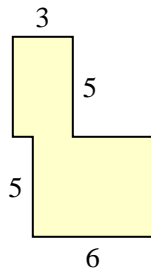
Find the total area of each shape. Measurement is in millimeters (mm). Not to scale.

Answers

1)



2)

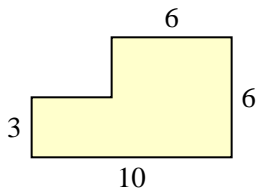


1. _____

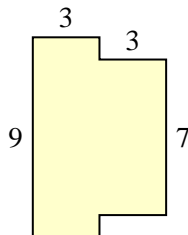
2. _____

3. _____

3)



4)

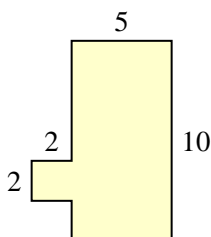


4. _____

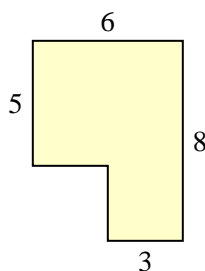
5. _____

6. _____

5)



6)



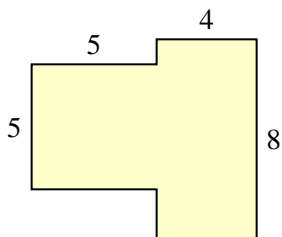
7. _____

8. _____

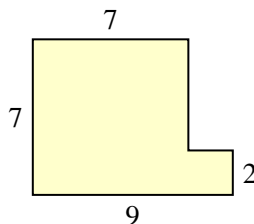
9. _____

10. _____

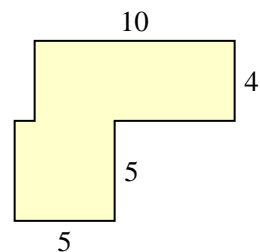
7)



8)



9)



10)

