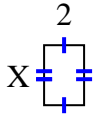




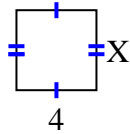
Find the value of X for each figure. Each figure is in centimeters (cm). Not to scale.

Answers

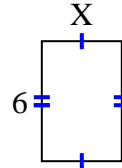
1) Area = 6 cm^2



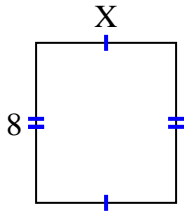
2) Area = 16 cm^2



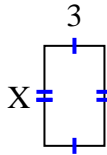
3) Area = 24 cm^2



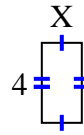
4) Area = 56 cm^2



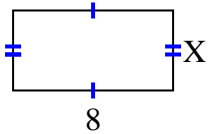
5) Area = 15 cm^2



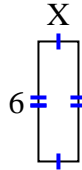
6) Area = 8 cm^2



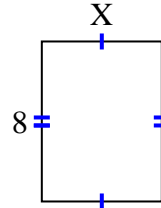
7) Area = 32 cm^2



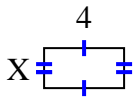
8) Area = 12 cm^2



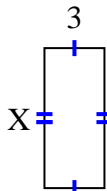
9) Area = 48 cm^2



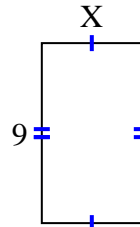
10) Area = 8 cm^2



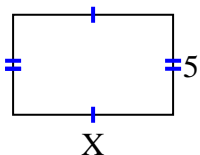
11) Area = 21 cm^2



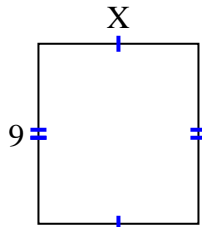
12) Area = 45 cm^2



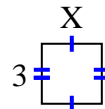
13) Area = 40 cm^2



14) Area = 72 cm^2



15) Area = 9 cm^2



1. _____
2. _____
3. _____
4. _____
5. _____
6. _____
7. _____
8. _____
9. _____
10. _____
11. _____
12. _____
13. _____
14. _____
15. _____