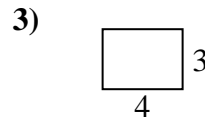
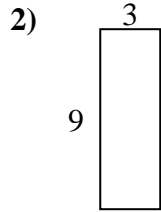
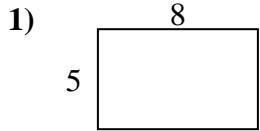


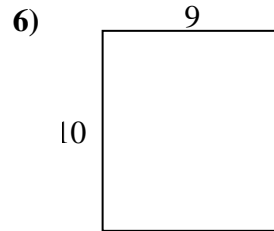
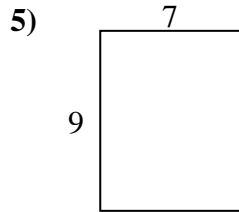
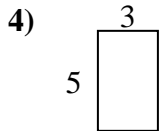


Find the perimeter and area of each figure. Each figure is in centimeters (cm). Not to scale.

Answers



1. _____



2. _____

3. _____

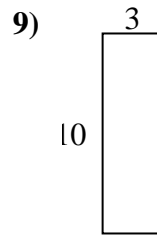
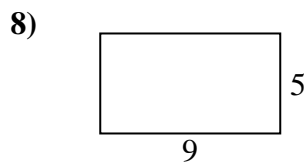
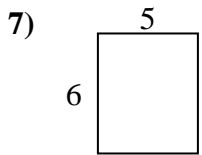
4. _____

5. _____

6. _____

7. _____

8. _____

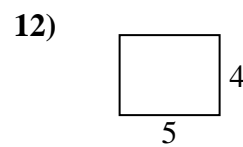
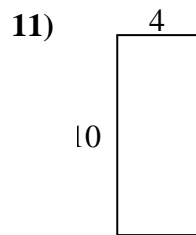
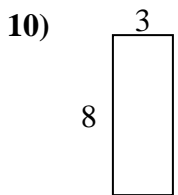


9. _____

10. _____

11. _____

12. _____



13. _____

14. _____

15. _____

