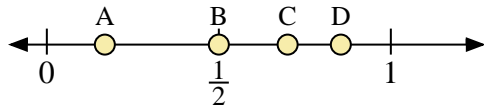
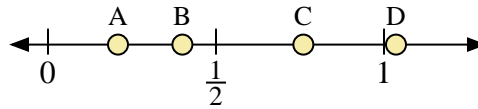




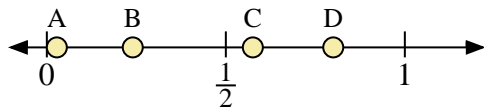
Use the number lines to answer the questions.



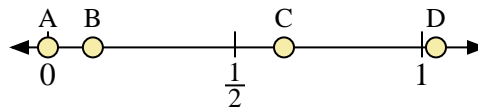
- 1) Which letter best represents the location of 0.70?
- 2) Which letter best represents the location of 0.50?



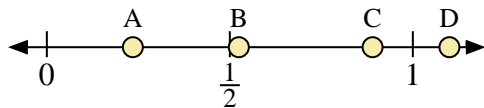
- 3) Which letter best represents the location of 0.40?
- 4) Which letter best represents the location of 0.76?



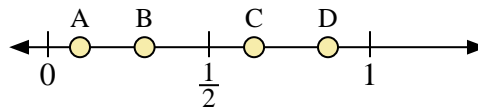
- 5) Which letter best represents the location of 0.8?
- 6) Which letter best represents the location of 0.24?



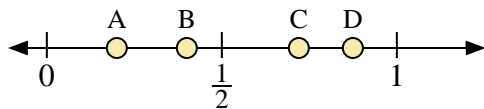
- 7) Which letter best represents the location of 0.0?
- 8) Which letter best represents the location of 0.12?



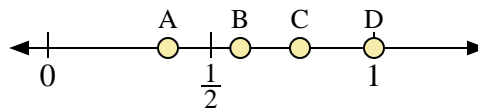
- 9) Which letter best represents the location of 1.1?
- 10) Which letter best represents the location of 0.89?



- 11) Which letter best represents the location of 0.3?
- 12) Which letter best represents the location of 0.64?



- 13) Which letter best represents the location of 0.20?
- 14) Which letter best represents the location of 0.40?



- 15) Which letter best represents the location of 1.00?
- 16) Which letter best represents the location of 0.59?

Answers

1. _____
2. _____
3. _____
4. _____
5. _____
6. _____
7. _____
8. _____
9. _____
10. _____
11. _____
12. _____
13. _____
14. _____
15. _____
16. _____