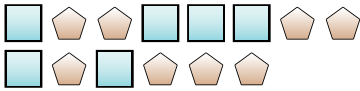




Solve each problem.

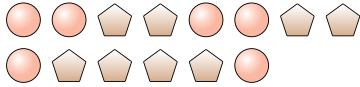
Ex) Express the squares as a fraction of the entire set.




1) Express the stars as a fraction of the entire set.



2) Express the circles as a fraction of the entire set.




3) Express the triangles as a fraction of the entire set.



4) Express the hearts as a fraction of the entire set.



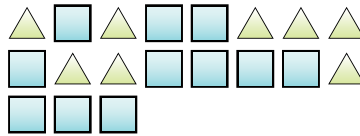
5) Express the stars as a fraction of the entire set.



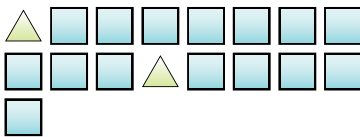
6) Express the pentagons as a fraction of the entire set.



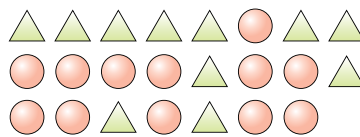
7) Express the triangles as a fraction of the entire set.



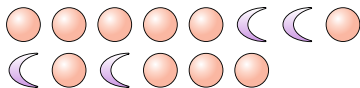
8) Express the squares as a fraction of the entire set.




9) Express the circles as a fraction of the entire set.



10) Express the moons as a fraction of the entire set.



11) Express the squares as a fraction of the entire set.



Answers

Ex. $\frac{6}{14}$

1. _____

2. _____

3. _____

4. _____

5. _____

6. _____

7. _____

8. _____

9. _____

10. _____

11. _____