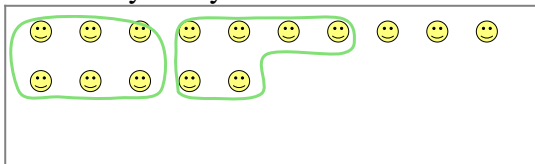





Use the shapes provided to answer the questions.

Ex) There are 15 shapes below. How many groups of 6 can you make with them?
How many will you have left over?



1) There are 27 shapes below. How many groups of 5 can you make with them?
How many will you have left over?



Answers

Ex. 2

Ex. 3

1a. _____

1b. _____

2a. _____

2b. _____

3a. _____

3b. _____

4a. _____

4b. _____

5a. _____

5b. _____

6a. _____

6b. _____

7a. _____

7b. _____

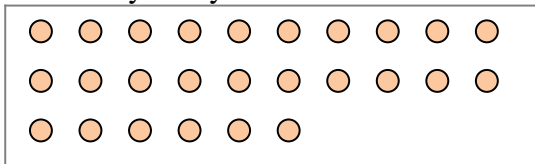
8a. _____

8b. _____

9a. _____

9b. _____

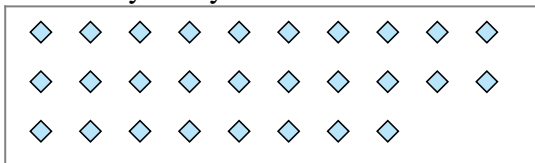
2) There are 26 shapes below. How many groups of 4 can you make with them?
How many will you have left over?



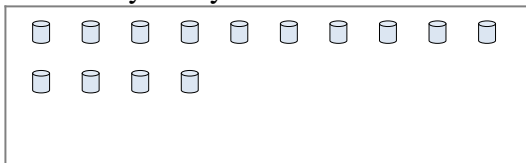
3) There are 23 shapes below. How many groups of 9 can you make with them?
How many will you have left over?



4) There are 28 shapes below. How many groups of 2 can you make with them?
How many will you have left over?



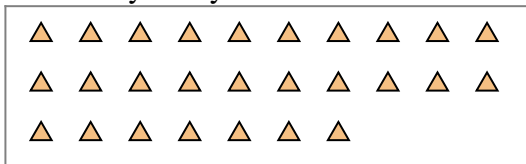
5) There are 14 shapes below. How many groups of 4 can you make with them?
How many will you have left over?



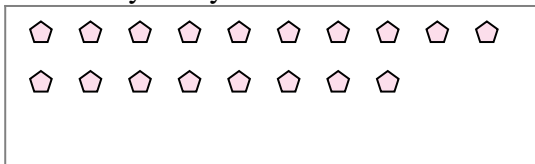
6) There are 18 shapes below. How many groups of 5 can you make with them?
How many will you have left over?



7) There are 27 shapes below. How many groups of 6 can you make with them?
How many will you have left over?



8) There are 18 shapes below. How many groups of 3 can you make with them?
How many will you have left over?



9) There are 14 shapes below. How many groups of 3 can you make with them?
How many will you have left over?

