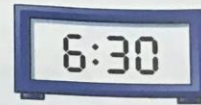


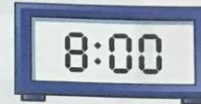
Match.



half past 2



1 o'clock




half past 6



half past 7

11 o'clock



8 o'clock

Colour to match.

half past 12



10 o'clock

10:00

5:30



half past 5



12:30

Write each time.

