





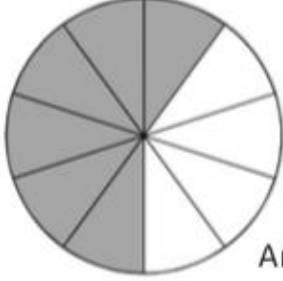
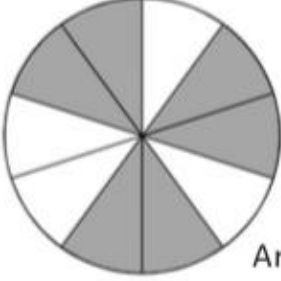
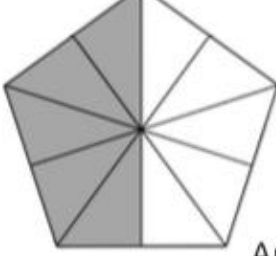
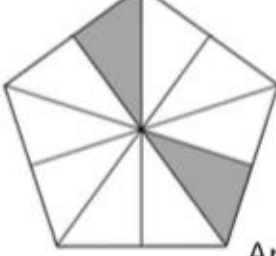


# Labelling Tenths

Tenths are created when a shape or a number is divided into ten equal sections. How many tenths are shaded in each of the following shapes?

<p>1.</p>  <p>Answer:</p>	<p>6.</p>  <p>Answer:</p>
<p>2.</p>  <p>Answer:</p>	<p>7.</p>  <p>Answer:</p>
<p>3.</p>  <p>Answer:</p>	<p>8.</p>  <p>Answer:</p>
<p>4.</p>  <p>Answer:</p>	<p>9.</p>  <p>Answer:</p>
<p>5.</p>  <p>Answer:</p>	<p>10.</p>  <p>Answer:</p>