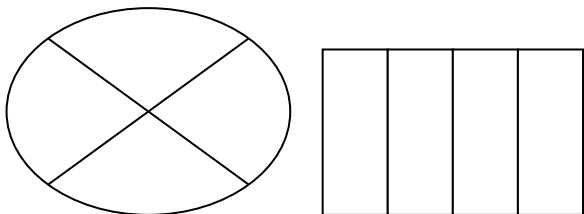


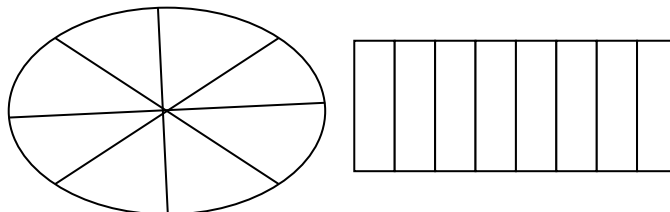
Fractions of shapes

LI: We are learning to shade different fractions of shapes.

Shade $\frac{3}{4}$ of each of the following shapes.




Shade $\frac{5}{8}$ of each of the following shapes.

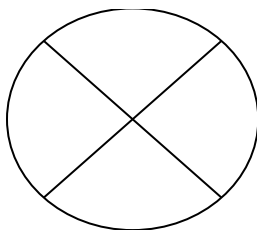


Shade the amount shown of each shape:


$\frac{2}{6}$



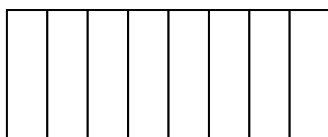
$\frac{1}{4}$



$\frac{9}{16}$



$\frac{7}{8}$



$\frac{3}{5}$

