


**LI: to record times using am and pm.**

**Write the times given using am or pm. Then draw the time on the clock. The first one has been done for you.**

(Remember - the big hand (minute hand) points to the 12 and the small hand (hour hand) points to the hour).

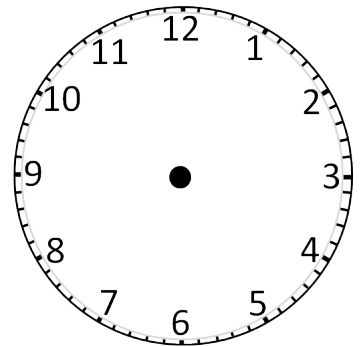
1. Three o'clock in the morning.

3.00 am



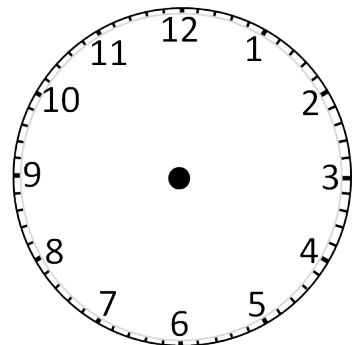
2. Seven o'clock in the evening.

\_\_\_\_\_



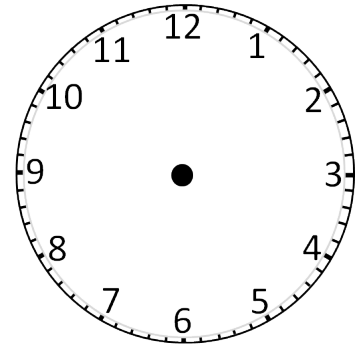
3. Six o'clock in the morning.

\_\_\_\_\_



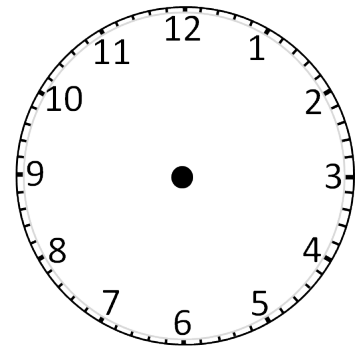
4. Two o'clock in the afternoon

---



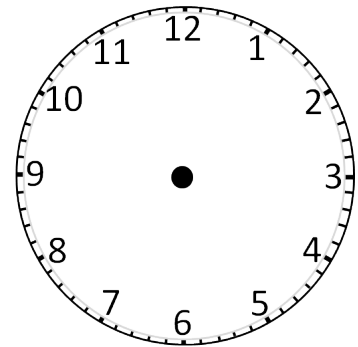
5. Five o'clock in the morning

---



6. Eleven o'clock in the morning

---



7. Twelve noon (mid-day)

---

