

Hello,

The following activities are additional Maths and Literacy tasks for each group.

These tasks are mainly activity sheet-based so the children will most likely require some support throughout them - to explain the task and deal with any questions they may have about what they should be doing.

There is no set order for these activities, nor is there any expectation to complete them all.

If the children do complete any of these activities - or any other activities you may be doing with them - it would be great to see what they have been doing. You can email me scans, photographs or even videos at:

gw20mcnabandrew@glow.sch.uk

Thank you!


Mr McNab

Literacy Activities




Full Stops

This week I would like you to listen to the story *There's No Such Thing As Nessie*. Use the link to watch and listen to the story:
[There's No Such Thing As Nessie](#)



Write words around the picture to describe Nessie!



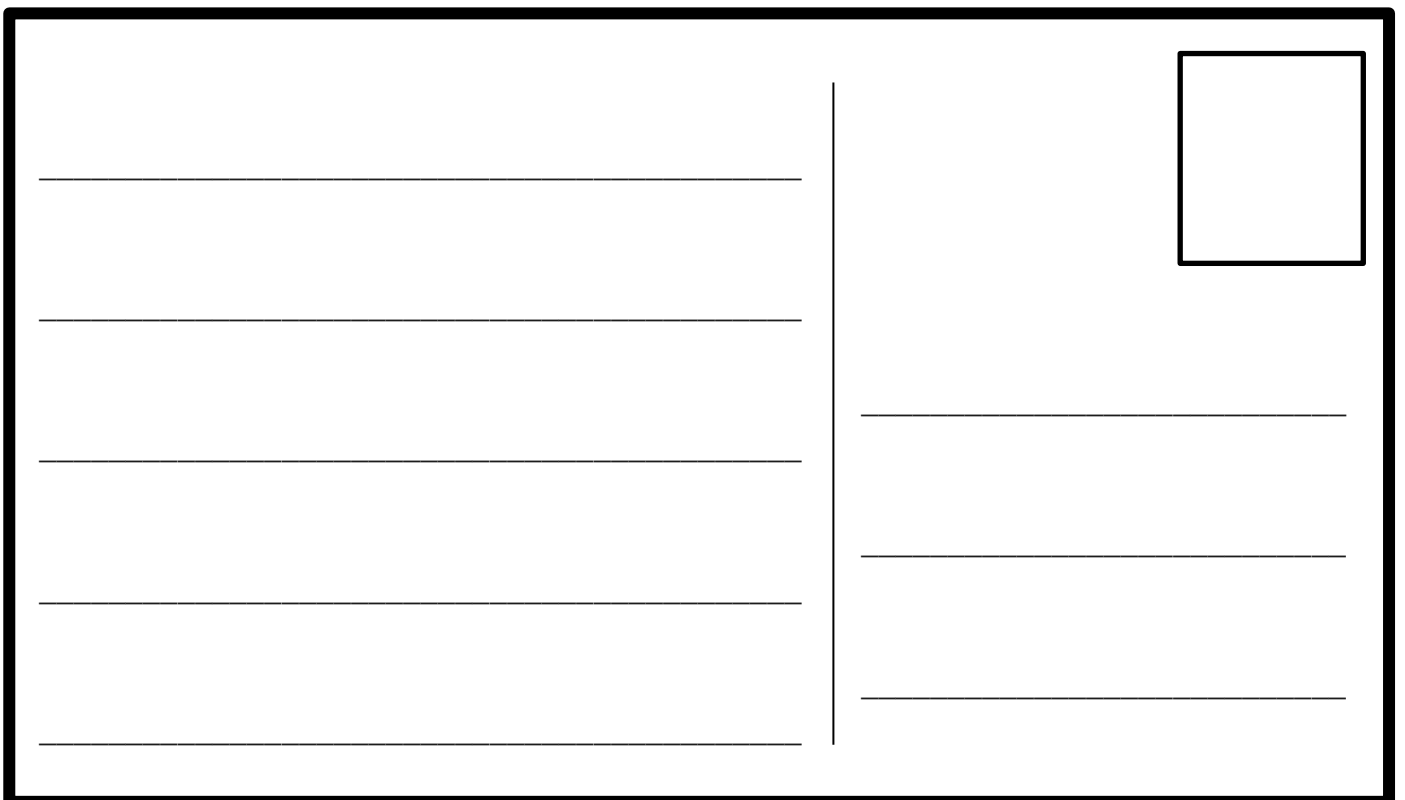
Full Stops

Imagine you are visiting Loch Ness. Did you spot Nessie? Write a postcard to someone to tell them about your trip to Loch Ness!

Front



Back



Commas


Read the information about the Loch Ness Monster, and then answer the questions!

The Loch Ness Monster

The Legend of Loch Ness

The Loch Ness monster, Nessie, is said to live in the deep, dark waters of Loch Ness, Scotland. Loch is a Scottish word for lake.

The story of Nessie was said to have started in AD 565. A monk called Columba saw a giant 'water beast' coming out of the water. He said a prayer to scare the monster away.



Believe It or Not?

- Some scientists think that Nessie was a dinosaur.
- Part of the loch is 812ft deep. It has been named Nessie's Lair.
- There are over 200 000 Internet searches for Nessie every month.
- Nessie has her own fan club.
- Even Scooby Doo has tried to find Nessie!

Fact or Fiction?

Nobody has ever proved Nessie to be real. However, there have been over 1000 sightings since the legend began. Three people have already spotted Nessie in 2017! Over one million people visit the loch every year to try and spot the famous monster.

Famous Nessie Sightings:



Sighting

Evidence

Hoax

In 1934, a surgeon called Robert White said that he saw Nessie's head coming out of the water.



It was a toy submarine with a fake head and tail.

In 1935, a hunter said he found a footprint on the banks of Loch Ness.



It was made with a stuffed hippo foot.

In 2012, a boat skipper reported he saw a hump coming out of the loch.



It was a model of Nessie.

In 2014, Nessie was spotted on a satellite photo.



It was the wake of a boat.

Commas Questions

1. Where is Loch Ness?

Loch Ness is _____

2. What is a loch?

A river A lake An ocean

3. What two words are used to describe the loch?

4. True or false?

Nessie was first spotted in 1565		Loch Ness is in England	
The loch is 812 feet deep		Three people spotted Nessie in 2017	

5. Why did people lie about seeing Nessie?

6. What did Robert White say he saw in the water?

7. Do you think the Loch Ness Monster is real? Why?

8. Write two facts you have learned about the Loch Ness Monster!

Exclamation Marks


Read the information about the Loch Ness Monster, and then answer the questions!

The Loch Ness Monster

The Legend of Loch Ness

The Loch Ness monster, known as Nessie, is said to live in the deep, murky waters of Loch Ness. Loch is a Scottish word for lake. Loch Ness is located in the Highlands of Scotland next to the town of Inverness. The loch is the second largest in Scotland. The deepest part is 812ft and it has been named Nessie's Lair.

The first story of Nessie, the monster in the loch, dates back to AD 565. A monk called Columba encountered a giant 'water beast' coming out of Loch Ness. Legend tells that Columba said a prayer and scared the monster off.




Believe It or Not?





- Some scientists think that Nessie was a marine dinosaur.
- There are over 200 000 Internet searches for Nessie every month.
- Nessie has her own fan club.
- The largest search for the monster cost £1 million.
- Even Scooby Doo has tried to find Nessie – he too was unsuccessful!

Fact or Fiction?

Nobody has ever proved Nessie to be real. However, there have been over 1000 sightings since the legend began; there is even an official website to report a sighting. Three people have already spotted Nessie in 2017 and they have photographic evidence. Over a million tourists visit the loch every year to try and spot the famous monster. Steven Feltham has been looking for Nessie for 25 years. He is in the Guinness Book of World Records.



Famous Nessie Sightings:

Sighting	Evidence	Hoax
<p>In 1934, a surgeon called Robert White reported that he saw Nessie's head coming out of the water.</p>		<p>40 years later, it was uncovered as a toy submarine with a fake head and tail.</p>
<p>In 1935, a hunter claimed he found a footprint on the banks of Loch Ness.</p>		<p>The print was made with a stuffed hippo foot.</p>
<p>In 2012, a boat skipper saw a hump coming out of the loch.</p>		<p>In 2013, the skipper admitted it was a fibreglass model of Nessie.</p>
<p>In 2014, Nessie was spotted on a satellite photo.</p>		<p>It was the wake of a boat.</p>

Exclamation Marks Questions

1. Where is Loch Ness?

Loch Ness _____

2. Complete the sentence:

The deepest part of the loch is known as _____

3. What is a lair?

4. What two words are used to describe the loch?

5. When did the legend of Nessie begin and why?

6. What do you think Columba saw in the loch?

7. Why did people lie about seeing Nessie?

8. Do you think the Loch Ness Monster is real? Why?

9. Draw a line to match the date to the hoax information.

2012

Nessie was spotted on a satellite image.

1935

A skipper said there was a hump in the water.

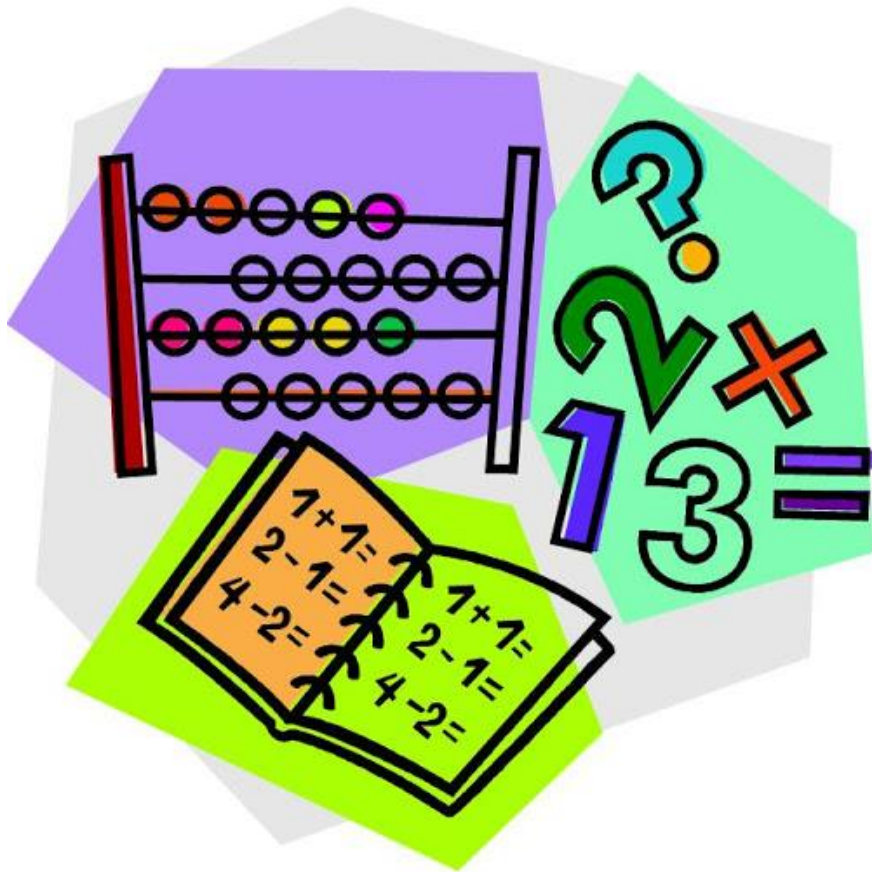
1934

The surgeon's photo became world famous.

2014



A hunter said he found Nessie's footprint.



Maths Activities







Circles



WORKING OUT

1) There are 5  .
There are 2  .
What is the sum? $5 + 2 =$ _____

2) There are 3  .
3 more  come.
How many in all? _____

3) I have 4  .
I buy 4  more.
How many do I have now? _____

4) Jack has 2  .
Jill has 4  .
How many in all? _____

5) There are 7  .
2  more come.
How many are there now? _____

6) I have 3  .
I buy 5  more.
How many do I have now? _____

Circles

Write down the number in the number frames.

1)

●	●	●	●	●
●	●	●	●	●

●	●	○	○	○
○	○	○	○	○

 = _____

2)

●	●	●	●	●
●	●	●	●	●

●	●	●	●	●
○	○	○	○	○

 = _____

3)

●	●	●	●	●
●	●	●	●	●

●	●	●	●	●
●	●	●	●	●

 = _____

4)

●	●	●	●	●
●	●	●	●	●

●	●	●	●	●
●	○	○	○	○

 = _____

5)

●	●	●	●	●
●	●	●	●	●

●	○	○	○	○
○	○	○	○	○

 = _____

6)

●	●	●	●	●
●	●	●	●	●

●	●	●	●	○
○	○	○	○	○

 = _____

7)

●	●	●	●	●
●	●	●	●	●

●	●	●	●	●
●	●	●	●	○

 = _____

8)

●	●	●	●	●
●	●	●	●	●

●	●	●	●	●
●	●	○	○	○

 = _____

9)

●	●	●	●	●
●	●	●	●	●

●	●	●	●	●
●	●	●	○	○

 = _____

Squares

Count the number of TENS and ONES, then write out the value of the numbers and add them up.

2 tens + 3 ones

$$20 + 3$$

23

1 tens + 3 ones

$$10 +$$

3 tens + 2 ones

$$30 +$$

1 ten + 5 ones

$$+ 5$$

2 tens + 5 ones

$$+$$

3 tens + 3 ones

$$+$$

Use place value to answer the questions below.

1) $10 + 6 =$

2) $30 + 2 =$

3) $20 + 4 =$

4) $50 + 1 =$

5) $20 + 4 =$

6) $30 + 5 =$

7) $40 + 2 =$

8) $20 + 7 =$

9) $30 + 9 =$

10) $50 + 4 =$

11) $30 + 7 =$

12) $60 + 4 =$

13) $70 + 2 =$

14) $20 + 5 =$

15) $40 + 8 =$

16) $10 + 8 =$

17) $80 + 6 =$

18) $50 + 7 =$

Squares

16 people are on the bus. 5 more people get on the bus. How many people are on the bus now?



Ava has 12 sweets and Amy has 17 sweets. How many sweets do they have altogether?



Juliet has 15 dolls. She gets 10 more dolls for her birthday. How many dolls does she have in total?



Nathaniel has 2 cats. The mummy cat has 19 kittens. How many cats does Thomas have now?



On Saturday Blair scored 17 goals. On Sunday he scored 11 goals. How many goals did he score at the weekend?



Alex has 39 stickers. Her mam gave her 8 more. How many stickers does she have now?



Lexi has 55 hats. She gets 2 more for her birthday. How many hats does she have altogether?



Triangles

Have a go at solving these multiplication word problems.

Can you spot the 'trick' problem which is not a multiplication problem?

1) How many legs do 3 dogs have?



2) There are 5 pens in a pack. How many pens in 3 packs?

3) How many socks are there in 5 pairs?



4) I download 3 games onto my tablet. The next day I download 7 more. How many have I downloaded?

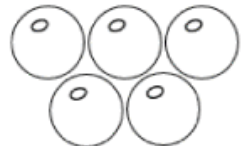
5) I buy 5 packs of peanut butter cups. Each pack has 3 cups. How many cups are there in total?



6) A guitar has 6 strings. How many strings would I need to restring 3 guitars?



7) I buy 4 packs of ping-pong balls. Each pack has 5 balls. How many balls are there?



Did you spot the trick problem?



Triangles

COMBINING HUNDREDS, TENS AND ONES SHEET

Remember to count the Hundreds first then the Tens, and then the Ones.

1) 6 HUNDREDS + 4 TENS = 640

2) 3 HUNDREDS + 2 TENS + 7 ONES = _____

3) 7 HUNDREDS + 6 TENS + 2 ONES = _____

4) 9 HUNDREDS + 1 TEN + 6 ONES = _____

5) 2 HUNDREDS + 7 ONES = _____

6) 8 TENS + 6 ONES = _____

7) 6 HUNDREDS + 2 TENS + 9 ONES = _____

8) 8 TENS + 2 HUNDREDS + 5 ONES = _____

9) 5 TENS + 4 HUNDREDS + 8 ONES = _____

10) 2 ONES + 4 TENS + 3 HUNDREDS = _____

11) 7 HUNDREDS + 9 ONES + 3 TENS = _____

12) 8 ONES + 6 HUNDREDS + 2 TENS = _____

13) 7 ONES + 4 HUNDREDS + 9 TENS = _____

14) 5 HUNDREDS + 9 ONES + 4 TENS = _____

15) 6 TENS + 8 ONES + 7 HUNDREDS = _____

16) 6 TENS + 2 TENS + 8 HUNDREDS = _____

17) 3 HUNDREDS + 7 ONES + 2 HUNDREDS = _____

18) 5 ONES + 7 TENS + 3 HUNDREDS = _____

19) 4 TENS + 6 HUNDREDS + 8 ONES = _____

20) 4 ONES + 4 HUNDREDS + 6 TENS = _____