


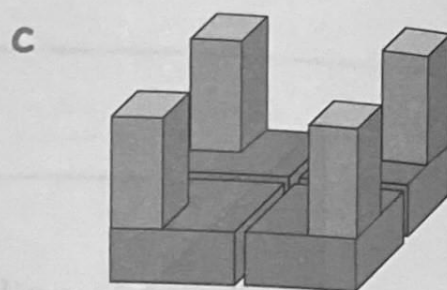



Revision of Fractions


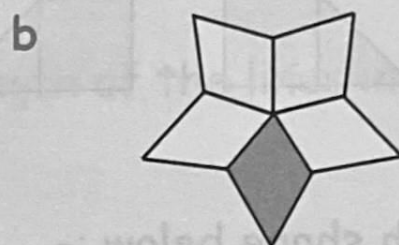

1. Which of these shapes have been split in **half** ?




2. Which of these shapes have been split into **quarters** ?



3. Write down what **fraction** of each has been coloured.



4. There are 12 pies left in the baker shop.
Mrs Bolland buys **half** of them.
How many pies are left ?



5. George the gardener has 20 empty pots.
He puts flower seeds into a **quarter** of them.
How many pots will have seeds in them ?



6. 12 trains pass through my station every hour.
Only $\frac{1}{3}$ of them actually stop.
How many of them go straight through ?

