


Mathematics

Circles

Week beginning 15th June 2020

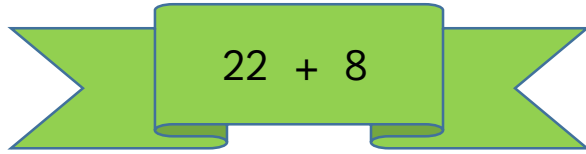
This week, we will continue to revise addition and subtraction. The following tasks have a mixture of each. It is important we look at the **symbol** before we work out the calculation.

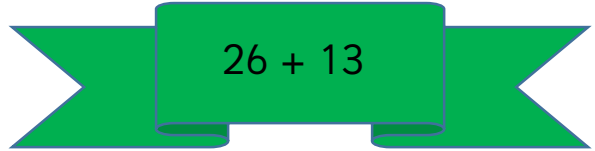


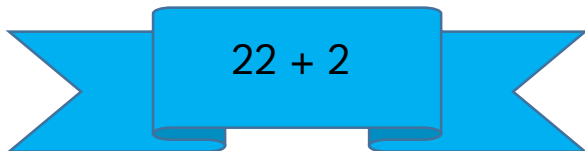
If you have any problems, remember you can email me at gw14reillyelaine@glow.co.uk

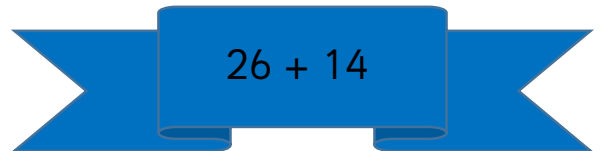
Task 1

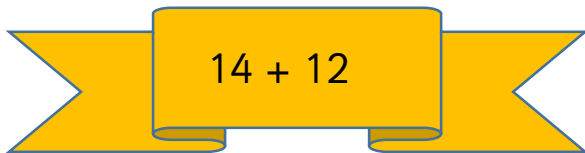
Find each total. Use your number square to help you.

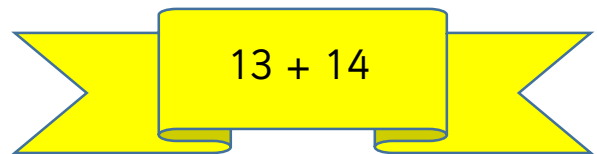

$$22 + 8$$

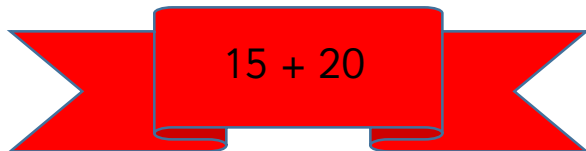

$$26 + 13$$

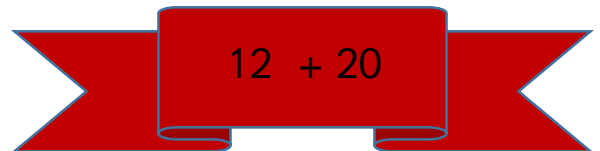

$$22 + 2$$

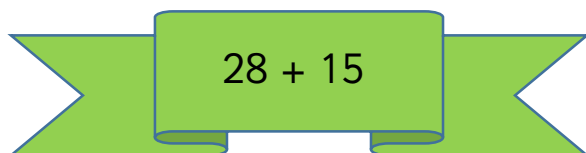

$$26 + 14$$

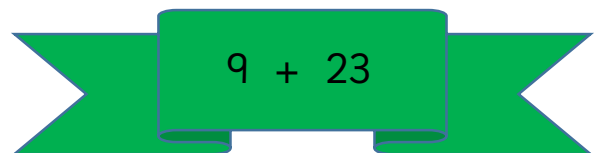

$$14 + 12$$


$$13 + 14$$


$$15 + 20$$


$$12 + 20$$


$$28 + 15$$


$$9 + 23$$

Task 2

Copy and complete the following into your home learning jotter.
Remember and check whether the sum is **addition** or **subtraction**.

$10 + 6 = \underline{\quad}$

$7 + 16 = \underline{\quad}$

$22 - 2 = \underline{\quad}$

$26 - 6 = \underline{\quad}$

$9 + 21 = \underline{\quad}$

$28 + 4 = \underline{\quad}$

$14 - 9 = \underline{\quad}$

$30 - 5 = \underline{\quad}$

Task 3

Remember when you are **adding** numbers together, always start with the largest number. The first one has been completed for you.

Find each **total**.

$7 + 14 + 3 =$

$14 + 7 + 3 =$

24

$11 + 8 + 6 =$

$12 + 3 + 6 =$

$2 + 18 + 7 =$

$9 + 11 + 20 =$

Task 4

Work out the following sums.

$23 \text{ take away } 8 = \underline{\quad}$

$23 - 8 = \underline{\quad}$

$10 \text{ less than } 22 = \underline{\quad}$

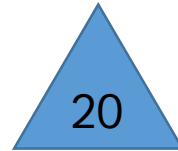

$25 \text{ subtract } 5 = \underline{\quad}$

$16 \text{ minus } 6 = \underline{\quad}$

$\text{Subtract } 6 \text{ from } 29 \underline{\quad}$

Task 5

Work out what the sum is and then find the total. Remember to look and see whether it's **addition** or **subtraction**.



+



=



-



=



+



=



-



=



+



=
