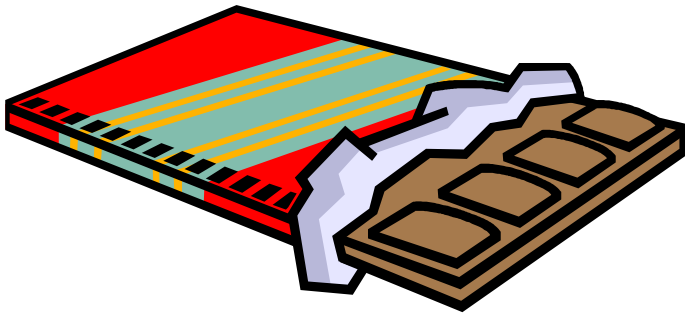


Shopping List


L.I. - I am learning to add and subtract to find the answers.
Use your written strategies (upstairs/downstairs sums) to find the answers.



Chocolate
24p



Pear
38p



Potatoes
56p



Apple
23p



Grapes
41p




Bread
39p



Peppers
34p



Cupcake
17p



Biscuits
65p

Shopping List

1. If I buy a chocolate bar and some grapes, how much money do I spend?
2. If I buy some bread and an apple, how much money do I spend?
3. If I buy some potatoes, how much change would I get from £1?
4. If I buy a cupcake and some grapes, how much do I spend?
5. I buy some peppers and a pear. How much do I spend?
6. If I buy some biscuits and a cake, how much change would I get from £1?