


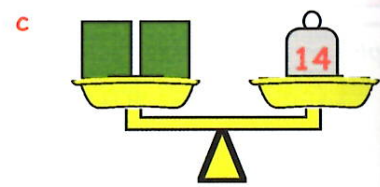
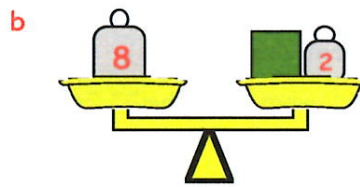
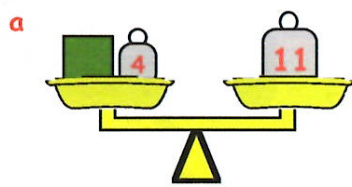
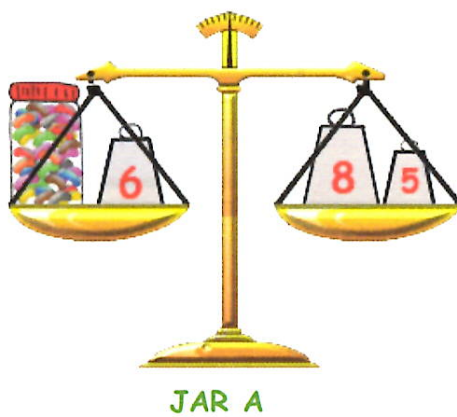


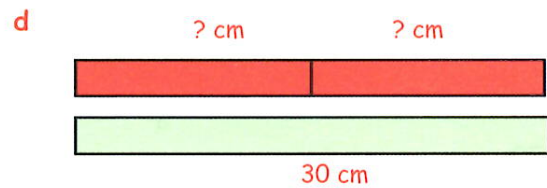
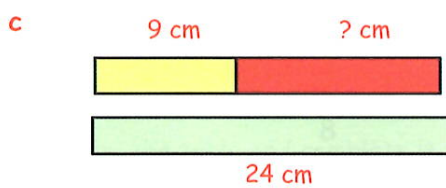
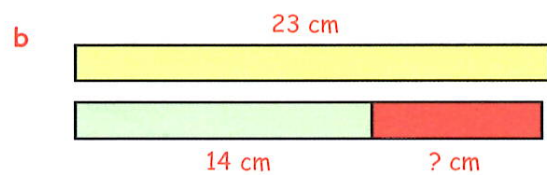
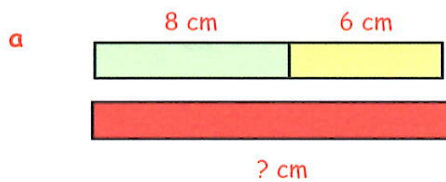
4. Look at the scales shown below and find the weight of the **green** box each time :-



5. Which of the 2 sweetie jars is **heavier** and by how much is it heavier than the other ?



6. What must the length of the **red** strip of paper be each time here ?



7. Bob and Marcia compare how much money each has.

Bob has £53 and together they have £72.

a Write down a statement using £53, £72 and £* (*Marcia's money*).

b Find out how much money Marcia has.

