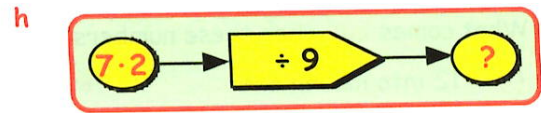
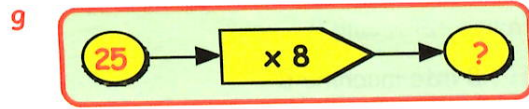
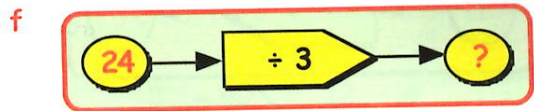
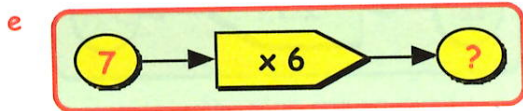
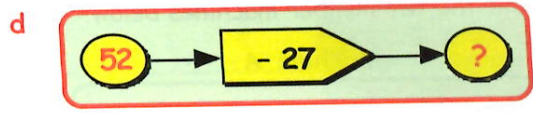
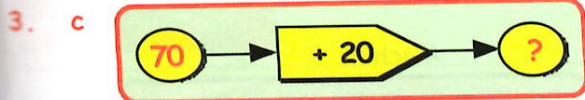

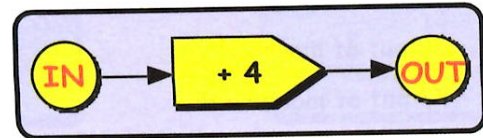




number
follow
operations
using
operations



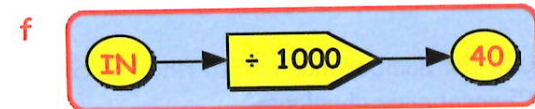

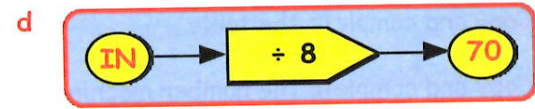
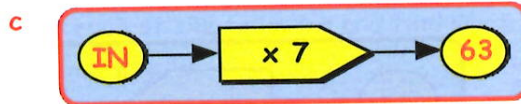
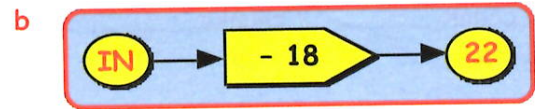
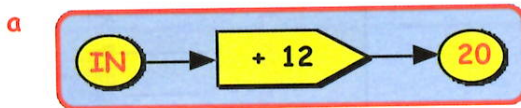
4. Here is another number machine.
(Read the question **carefully**).



What number must have been put **IN** to get the following numbers **OUT** :-

- a 5 (the answer is **NOT** 9) b 11 c 21 d 70 ?

5. Look at the number machines below.
What number must have been put **IN** :-



6. Write down the missing number (and sign) in each machine below :-

