




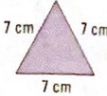



MONDAY

1. What is the time?
2. $0.8 + 0.5 =$
3.
$$\begin{array}{r} 3065 \\ + 2414 \\ \hline \end{array}$$
4. 2, 2.3, 2.6, 2.9,
5. Write the numeral nine thousand four hundred.
6. $5 \overline{)700} =$
7. $1 = \frac{1}{10}$ of
8. $5 \times 8 =$
9. This is a net for a 
10. Sum of 6 and 7 =
11. Circle the answer. 

<	right angle
>	right angle
=	right angle
12. $\frac{1}{2} > \frac{1}{6}$ true false
13. Write as a decimal. 500 g = 0. kg
14. The equivalent fraction of $\frac{1}{2} =$ / 10
15. On 2.5.07, what month are you in?
16. $2\frac{1}{4}$ hours = hour(s) minute(s)
or minute(s)
17. 10:25 = 
18. $170 - 80 =$
19. 1, 3, 9, 27,
20. What is the area of a grid 9 by 11? squares

TUESDAY

1. What is the time? 
2. This shape is a 
3. $6 \times 0 \times 3 =$
4. Arrange 6, 0, 2, 7, into the highest value.
5. $\frac{2}{3} > \frac{1}{2}$ true false
6. $7 \times 5 = (1 \times 5) + (\text{ } \times 5)$
7. Product of 4 and 8 =
8. Draw a net for a cube.
9. $10 = \frac{1}{10}$ of
10. What type of triangle? 
11. What is the perimeter of the above triangle? cm
12. $140 - 90 =$
13. Circle the answer. 

<	right angle
>	right angle
=	right angle
14. £14.50 = p
15. What is the date a week earlier than 9 December?
16. What is the cost of buying 1 kg of expensive cheese at £2.45 per 100 g?
17. $4 \overline{)492} =$
18. Round 5801 to the nearest thousand.
19. £20.00 - £3.80 =
20. Write the numeral seven thousand, nine hundred and seventy-seven.