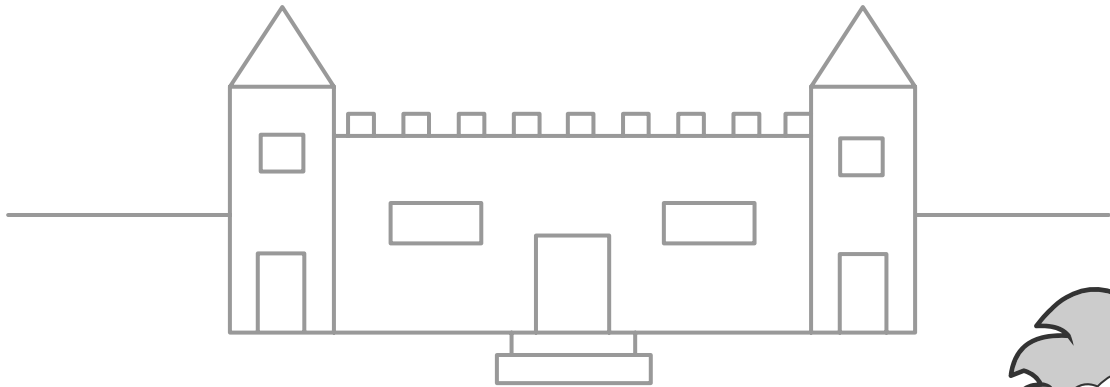






Name: \_\_\_\_\_ Class: \_\_\_\_\_

Colour the shapes.

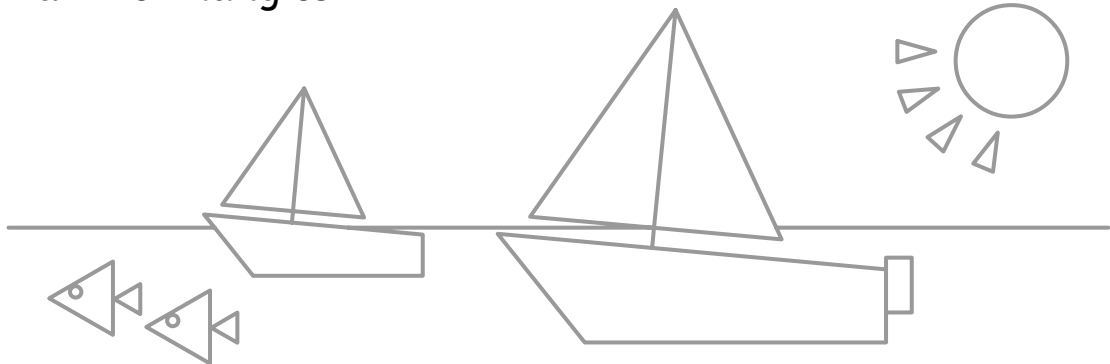
**1** Colour the rectangles.



**2** Colour the circles.




**3** Colour the triangles.



**4** Colour the hexagon.



**5** Colour the square.



**6** Colour the pentagon.



**7** Colour the octagon.





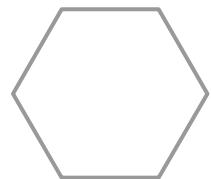

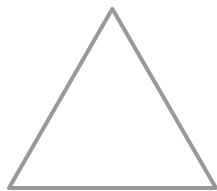
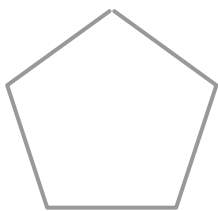
Name: \_\_\_\_\_ Class: \_\_\_\_\_

How many sides does each shape have?

Shape	Number of Sides
Hexagon	6
Circle	
Rectangle	
Square	
Triangle	
Pentagon	
Octagon	

Fill in the shape names.

rectangle      circle      square      ~~pentagon~~  
 hexagon      octagon      triangle

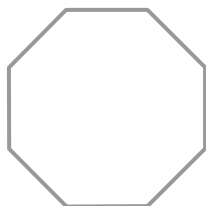


**pentagon**

\_\_\_\_\_

\_\_\_\_\_

\_\_\_\_\_



\_\_\_\_\_

\_\_\_\_\_

\_\_\_\_\_

